

## Constable GD in CAPFs SSF Rifleman GD in Assam Rifles and Sepoy in NCB Examination 2022

Roll Number	@Qmaths Telegram Channel
Candidate Name	@Qmaths Telegram Channel
Venue Name	ION Digital Zone iDZ 2 Bhauti
Exam Date	13/02/2023
Exam Time	9:00 AM - 10:00 AM
Subject	Constable GD Examination 2022

Section : **Part-A-General Intelligence and Reasoning**

**Q.1** Which figure should replace the question mark (?) if the series were to be continued?

L	P		D		3	L	□	
D		3	□	L	P	□		P
	□			3		D	L	P
								?

Ans

- ✓ 1.

	P	
D	L	3
	□	
- ✗ 2.

	P	
3	L	D
	□	
- ✗ 3.

	P	
D		3
	□	L
- ✗ 4.

L	D	
P		□
	3	

Question ID : 26433076642  
 Status : Answered  
 Chosen Option : 4

**Q.2** Which two numbers(not digits), from the given options, should be interchanged to make the given equation correct?  
 $(200 - 6) \div 14 \times 2 - 8 = 24 \div 4 \times 25 \div 5$

- Ans**
- 1. 6 and 4
  - 2. 8 and 2
  - 3. 24 and 14
  - 4. 6 and 8

Question ID : 26433082480  
Status : Answered  
Chosen Option : 1

**Q.3** Three statements are given, followed by three conclusions numbered I, II and III. Assuming the statements to be true, even if they seem to be at variance with commonly known facts, decide which of the conclusions logically follow(s) from the statements.

**Statements:**

All bags are sticks.

All trees are papers.

Some sticks are papers.

**Conclusions:**

I. Some sticks are trees.

II. Some papers are trees.

III. No bags are papers.

- Ans**
- 1. All conclusions follow
  - 2. Only conclusions I and III follow
  - 3. Only conclusion II follows
  - 4. Only conclusion III follows

Question ID : 26433090995  
Status : Answered  
Chosen Option : 3

**Q.4** In a certain code language, 'SHAKE' is written as 'HKSAE' , 'RIVER' is written as 'RRVEI', how will 'OCEAN' be written as in that language?

- Ans**
- 1. AEOCN
  - 2. EACNO
  - 3. CNOEA
  - 4. CNAEO

Question ID : 26433069653  
Status : Answered  
Chosen Option : 4

**Q.5** Which of the following numbers will replace the question mark (?) in the given series?  
8, 18, 32, ?, 72, 98

- Ans**
- 1. 50
  - 2. 40
  - 3. 46
  - 4. 54

Question ID : 26433076739  
Status : Answered  
Chosen Option : 1

Q.6 Select the option that is related to the third word in the same way as the second word is related to the first word.

(The words must be considered as meaningful English words and must not be related to each other based on the number of letters/number of consonants/vowels in the word)

Up : Down :: Backward : ?

- Ans
- 1. Forward
  - 2. Straighten
  - 3. Lift
  - 4. Low

Question ID : 26433067975  
Status : Answered  
Chosen Option : 1

Q.7 'A + B' means 'A is the brother of B'

'A - B' means 'A is the wife of B'

'A × B' means 'A is the son of B'

'A ÷ B' means 'A is the husband of B'

If  $P + Q - S + R \times L \div M$ , then which of the following statements is correct?

- Ans
- 1. Q is the sister of M.
  - 2. P is S's wife's brother.
  - 3. L is the father of P.
  - 4. P is the brother of S.

Question ID : 26433069661  
Status : Answered  
Chosen Option : 2

Q.8 Select the letter-cluster from among the given options that can replace the question mark (?) in the following series.

JDZW, NWDA, RPHE, ?, ZBPM

- Ans
- 1. VILI
  - 2. VTHX
  - 3. TVSG
  - 4. TYID

Question ID : 26433074746  
Status : Answered  
Chosen Option : 1

Q.9 Select the option that is related to the fourth term in the same way as the first term is related to the second term and the fifth term is related to the sixth term.

256 : 15 :: ? : 17 :: 1225 : 34

- Ans
- 1. 361
  - 2. 324
  - 3. 289
  - 4. 225

Question ID : 26433074547  
Status : Answered  
Chosen Option : 2

**Q.10** Which two signs should be interchanged to make the below equation mathematically correct?

$$104 \div 8 - 24 \times 5 + 9 = 34$$

- Ans**
- 1. + and ÷
  - 2. - and +
  - 3. + and ×
  - 4. ÷ and ×

Question ID : 264330117518  
Status : Answered  
Chosen Option : 3

**Q.11** Select the option that is related to the third word in the same way as the second word is related to the first word.  
(The words must be considered as meaningful English words and must not be related to each other based on the number of letters/number of consonants/vowels in the word)

Vocal cord : Singer :: Feet : ?

- Ans**
- 1. Scientist
  - 2. Doctor
  - 3. Footballer
  - 4. Teacher

Question ID : 26433079467  
Status : Answered  
Chosen Option : 3

**Q.12** Which option represents the correct order of the given words as they would appear in the English dictionary?

- 1 inside
- 2 insert
- 3 insist
- 4 inert
- 5 investigate

- Ans**
- 1. 1,2,3,4,5
  - 2. 4,1,2,3,5
  - 3. 4,3,1,2,5
  - 4. 4,2,1,3,5

Question ID : 26433069290  
Status : Answered  
Chosen Option : 4

**Q.13** Which of the following numbers will replace the question mark (?) in the given series?

96, 90, ?, 60, 36, 6

- Ans**
- 1. 84
  - 2. 72
  - 3. 78
  - 4. 70

Question ID : 26433069391  
Status : Answered  
Chosen Option : 3

**Q.14** In a certain code language, 'PEOPLE' is written as 'NOEMEL' and 'TABLES' is written as 'RBAISE'. How will 'MATURE' be written in the same code language?

- Ans**
- 1. KTARER
  - 2. LATMRE
  - 3. JATRER
  - 4. AMRDRE

Question ID : 26433079484  
 Status : Answered  
 Chosen Option : 1

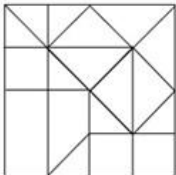
**Q.15** Select the correct mirror image of the given figure when the mirror is placed at MN as shown below.



- Ans**
- 1. 202srf27U
  - 2. 202srf57U
  - 3. 202srf57U
  - 4. 202srf57U

Question ID : 26433089459  
 Status : Answered  
 Chosen Option : 3

**Q.16** Select the option figure that is embedded in the given figure (rotation is NOT allowed).



- Ans**
- 1.
  - 2.
  - 3.
  - 4.

Question ID : 26433069483  
 Status : Answered  
 Chosen Option : 1

Q.17 Six students are sitting around a circular table facing the centre. Sam is sitting second to the right of Krish. Vishal is sitting second to the right of Sam. Savio is sitting third to the right of Sam. Michelle is the immediate neighbour of Sam and Krish. Dixon is sitting third to the right of Krish. Who is sitting between Vishal and Krish?

- Ans  1. Savio  
 2. Dixon  
 3. Sam  
 4. Michelle

Question ID : 26433081777  
Status : Answered  
Chosen Option : 1

Q.18 Six boys M, G, V, A, R and D are standing in a straight line facing towards North. Only three boys are standing to the left of G. M is standing at the second position from the left end. Only D is standing between G and A. Who is standing at the second position from the extreme right end?

- Ans  1. R  
 2. D  
 3. V  
 4. A

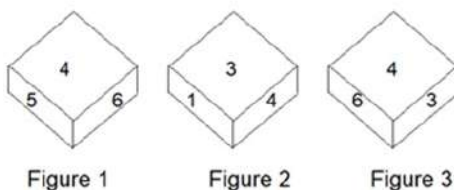
Question ID : 26433079061  
Status : Answered  
Chosen Option : 2

Q.19 Which letter-cluster will replace the question mark (?) to complete the given series?  
RQPS, NMLO, JIHK, ?, BAZC

- Ans  1. GFEH  
 2. GEFH  
 3. FDEG  
 4. FEDG

Question ID : 26433067718  
Status : Answered  
Chosen Option : 4

Q.20 Three different positions of the same dice are shown. Find the number on the face opposite the face having '2'.



- Ans  1. 3  
 2. 4  
 3. 1  
 4. 6

Question ID : 26433089454  
Status : Answered  
Chosen Option : 2

Section : Part-B-General Knowledge and General awareness

**Q.1** The honour of Sangeet Natak Akademi Fellowship carries \_\_\_\_\_.

- Ans**
- 1. Rs.1,00,000/- (Rupees One lakh) along with a Tamrapatra and Angavastram
  - 2. Rs.5,00,000/- (Rupees five lakh)
  - 3. Rs.3,00,000/- (Rupees three lakh) along with a Tamrapatra and Angavastram
  - 4. Rs.1,00,000/- (Rupees One lakh)

Question ID : 264330115892  
Status : Marked For Review  
Chosen Option : 1

**Q.2** Mawsynram in the \_\_\_\_\_ of the Khasi Hills receives the highest average rainfall in the world.

- Ans**
- 1. Southern part
  - 2. Northern part
  - 3. Western part
  - 4. Eastern part

Question ID : 26433091489  
Status : Marked For Review  
Chosen Option : 1

**Q.3** \_\_\_\_\_, established in 1829, is the oldest golf club in India and the first outside Great Britain.

- Ans**
- 1. East Point Golf Club
  - 2. The Bangalore Golf Club
  - 3. The Royal Calcutta Golf Club
  - 4. Cosmopolitan Club

Question ID : 26433089936  
Status : Marked For Review  
Chosen Option : 3

**Q.4** The Legislative Council of a state assembly \_\_\_\_\_ of the total number of members in the legislative of the state and in no case fewer than 40 members.

- Ans**
- 1. one-eighth
  - 2. one-tenth
  - 3. one-sixth
  - 4. one-third

Question ID : 26433086862  
Status : Answered  
Chosen Option : 2

**Q.5** Mahavir Jayanti is celebrated in the month of \_\_\_\_\_.

- Ans**
- 1. August-September
  - 2. March-April
  - 3. November-December
  - 4. May-June

Question ID : 264330115097  
Status : Not Answered  
Chosen Option : --

Q.6 \_\_\_\_\_ banks are owned by their customers and follow the cooperative principle of one person, one vote.

- Ans
- 1. State
  - 2. Nationalised
  - 3. Cooperative
  - 4. Scheduled

Question ID : 264330115305  
Status : Answered  
Chosen Option : 3

Q.7 Which of the following state hosted the Khelo India Youth Games 2021?

- Ans
- 1. Haryana
  - 2. Punjab
  - 3. Maharashtra
  - 4. Madhya Pradesh

Question ID : 264330115916  
Status : Answered  
Chosen Option : 1

Q.8 What is conversion of oil to vanaspati termed as?

- Ans
- 1. pasteurization
  - 2. preservation
  - 3. homogenization
  - 4. hydrogenation

Question ID : 264330115263  
Status : Answered  
Chosen Option : 4

Q.9 Solid Carbon dioxide is commonly called as \_\_\_\_\_.

- Ans
- 1. heavy water
  - 2. dry ice
  - 3. aspirin
  - 4. table sugar

Question ID : 264330115156  
Status : Answered  
Chosen Option : 2

Q.10 Who among the following was appointed as the new Chief of Defence Staff in September 2022?

- Ans
- 1. Ajay Singh
  - 2. Bipin Rawat
  - 3. Manoj Pande
  - 4. Anil Chauhan

Question ID : 264330114921  
Status : Answered  
Chosen Option : 4



Q.11 Which of the following city was the capital of the Pandyas?

- Ans
- 1. Kallupatti
  - 2. Kariapatti
  - 3. Madurai
  - 4. Palamedu

Question ID : 26433085217  
Status : Answered  
Chosen Option : 3

Q.12 Which article of the Indian Constitution deals with the fundamental duties?

- Ans
- 1. 51A
  - 2. 50
  - 3. 53A
  - 4. 52

Question ID : 264330115623  
Status : Answered  
Chosen Option : 1

Q.13 Which of the following forms an asset for a bank?

- I. Reserves
- II. Loans

- Ans
- 1. Only I
  - 2. Both I and II
  - 3. Neither I nor II
  - 4. Only II

Question ID : 26433054801  
Status : Answered  
Chosen Option : 1

Q.14 Where was the Communist Party of India (CPI) founded, in 1920?

- Ans
- 1. Andijan
  - 2. Bukhara
  - 3. Tashkent
  - 4. Namangan

Question ID : 264330115712  
Status : Not Answered  
Chosen Option : --

Q.15 Which among the following folk dances is popularly known as the 'stick dance'?

- Ans
- 1. Kolannalu
  - 2. Ghodemodni
  - 3. Theyyam
  - 4. Koli

Question ID : 264330115070  
Status : Not Answered  
Chosen Option : --

Q.16 Trade agreement between two parties is called:

- Ans  1. bilateral  
 2. multilateral  
 3. tripartite  
 4. unilateral

Question ID : 264330115385  
Status : Answered  
Chosen Option : 1

Q.17 Who took over as the Chief Executive Officer of National Institution for Transforming India (NITI) Aayog in July 2022?

- Ans  1. Narendra Singh Tomar  
 2. Parameswaran Iyer  
 3. Ajay Dhyani  
 4. Arvind Virmani

Question ID : 264330115008  
Status : Marked For Review  
Chosen Option : 2

Q.18 \_\_\_\_\_ are promoted throughout the country to save energy.

- Ans  1. Compact fluorescent lamps  
 2. Light emitting diode lamps  
 3. Incandescent bulb  
 4. Oil lamps

Question ID : 264330115552  
Status : Answered  
Chosen Option : 2

Q.19 The Consumer Protection Act provides for a \_\_\_\_\_ tier Consumer Disputes Redressal Agencies in India.

- Ans  1. three  
 2. one  
 3. two  
 4. four

Question ID : 264330116238  
Status : Not Answered  
Chosen Option : --

Q.20 Agriculture and fishing activities belong to which sector?

- Ans  1. Organized sector  
 2. Tertiary sector  
 3. Primary sector  
 4. Secondary sector

Question ID : 264330116090  
Status : Answered  
Chosen Option : 3

Section : Part-C-Elementary Mathematics

**Q.1** The store price of a chair is Rs.2,000. The successive discounts offered by the store is 10% and 15%. Calculate the total discount percentage for the chair.

- Ans
- 1. 10.25%
  - 2. 15.30%
  - 3. 12.50%
  - 4. 23.50%

Question ID : 26433075234  
Status : Answered  
Chosen Option : 4

**Q.2** A, B and C can finish a work in 10, 15 and 30 days, respectively. In how many days can A finish the work if he is assisted by B and C both every third day?

- Ans
- 1.  $9\frac{1}{2}$
  - 2. 10
  - 3.  $9\frac{1}{3}$
  - 4. 8

Question ID : 26433090265  
Status : Answered  
Chosen Option : 4

**Q.3** The population of bacteria in a culture prepared in a lab is  $8 \times 10^8$ . Their birth and death rates per hour are 12.75% and 10.75% respectively. Find their population in the culture after 3 h.

- Ans
- 1. 84,89,66,400
  - 2. 84,89,44,600
  - 3. 8,48,96,640
  - 4. 8,48,96,460

Question ID : 26433075919  
Status : Answered  
Chosen Option : 1

**Q.4** The marked price of a book is ₹600. After allowing a discount of 20% on the marked price, shopkeeper makes profit of ₹48. Find the gain percent.

- Ans
- 1. 5.5%
  - 2. 11.22%
  - 3. 11.11%
  - 4. 33.33%

Question ID : 26433092145  
Status : Answered  
Chosen Option : 3

Q.5 By selling a plot of land for ₹5,45,000 a person loses 8%. At what price should he sell it to gain 12%?

- Ans
- 1. ₹6,60,012.30
  - 2. ₹5,62,391.30
  - 3. ₹6,63,478.25
  - 4. ₹6,66,667.25

Question ID : 26433076268  
Status : Answered  
Chosen Option : 3

Q.6 Mohi and Suniti working separately can do a work in 12 and 15 days, respectively. Mohi starts the work and they work on alternate days. In how many days will the work be completed?

- Ans
- 1.  $16\frac{1}{4}$  days
  - 2.  $14\frac{1}{4}$  days
  - 3.  $13\frac{1}{4}$  days
  - 4.  $12\frac{1}{4}$  days

Question ID : 26433080199  
Status : Answered  
Chosen Option : 3

Q.7 How many hours will a car take to cover a distance of 354 kms at a speed of 59 km/h?

- Ans
- 1. 4
  - 2. 7
  - 3. 6
  - 4. 5

Question ID : 26433075077  
Status : Answered  
Chosen Option : 3

Q.8 If the cost price and the selling price of an article are Rs.1,850 and Rs.1,480 respectively, then what is the loss percentage?

- Ans
- 1. 20%
  - 2. 18%
  - 3. 25%
  - 4. 15%

Question ID : 26433075653  
Status : Answered  
Chosen Option : 1

**Q.9** A thief is spotted by a policeman from a distance of 100 m. When the policeman starts the chase, the thief also starts running. If the speed of the thief is 8 km/h and that of the policeman is 10 km/h, how far will the thief have run before he is overtaken?

- Ans
- 1. 400 m
  - 2. 300 m
  - 3. 250 m
  - 4. 350 m

Question ID : 26433075161  
Status : Answered  
Chosen Option : 1

**Q.10** A solid metallic hemisphere is melted and recast in the shape of a cone with the same base radius ( $r$ ) as that of the hemisphere. If  $h$  is the height of the cone, then the ratio of  $r$  and  $h$  is:

- Ans
- 1. 2 : 1
  - 2. 1 : 2
  - 3.  $1 : \sqrt{3}$
  - 4.  $\sqrt{3} : 1$

Question ID : 26433087411  
Status : Answered  
Chosen Option : 2

**Q.11** The HCF of  $\frac{3}{4}$ ,  $\frac{7}{8}$  and  $\frac{9}{20}$  is:

- Ans
- 1.  $\frac{1}{50}$
  - 2.  $\frac{1}{40}$
  - 3.  $\frac{1}{20}$
  - 4.  $\frac{1}{30}$

Question ID : 26433079820  
Status : Answered  
Chosen Option : 2

**Q.12** The ratio between two numbers is 3:5. If the LCM of these numbers is 240, then what are the two numbers?

- Ans
- 1. 48 and 80
  - 2. 42 and 88
  - 3. 48 and 88
  - 4. 36 and 94

Question ID : 26433075665  
Status : Answered  
Chosen Option : 1

Q.13 The numerator of a fraction is decreased by 25% and the denominator is increased by 25%. New fraction is how much percentage less than the original fraction?

- Ans
- 1. 45%
  - 2. 25%
  - 3. 40%
  - 4. 50%

Question ID : 26433091903  
Status : Answered  
Chosen Option : 3

Q.14 Out of a grain stock,  $\frac{1}{8}$  portion is rotten. What is the percentage of grain in the stock that is NOT rotten?

- Ans
- 1. 90%
  - 2. 77.5%
  - 3. 75%
  - 4. 87.5%

Question ID : 26433071250  
Status : Answered  
Chosen Option : 4

Q.15 The ratio of third proportional to X and Y and fourth proportional to X, Y and Z is 7 : 22, then the ratio Z : Y is:

- Ans
- 1. 22 : 7
  - 2. 1 : 5
  - 3. 49 : 484
  - 4. 7 : 22

Question ID : 26433081474  
Status : Answered  
Chosen Option : 1

Q.16 The average weight of 18 students in a class increases by 3.5 kg when one student weighing 45 kg is replaced by a new student. What is the weight (in kg) of the new student?

- Ans
- 1. 582
  - 2. 507
  - 3. 108
  - 4. 723

Question ID : 26433079997  
Status : Answered  
Chosen Option : 3

Q.17 The sum of the present ages of X, Y and Z is 165 years. Five years ago, the ratio of their ages was 3 : 5 : 7. What is the present average age of X and Z?

- Ans
- 1. 75 years
  - 2. 55 years
  - 3. 45 years
  - 4. 70 years

Question ID : 26433075433  
Status : Answered  
Chosen Option : 2

Q.18 A sum of Rs.6,000 was deposited for 3 years at 5% per annum, interest compounded annually. Find the interest for the third year.

- Ans
- 1. Rs.365.75
  - 2. Rs.330.75
  - 3. Rs.325.25
  - 4. Rs.360.25

Question ID : 26433082402  
Status : Answered  
Chosen Option : 2

Q.19 A number  $2X16$  is divided by the smallest number divisible by 4 and 9. The resultant number is the square of 9. Find the value of X.

- Ans
- 1. 3
  - 2. 5
  - 3. 7
  - 4. 9

Question ID : 264330116638  
Status : Answered  
Chosen Option : 4

Q.20 Find the volume of a cone whose radius is 10 cm and the slant height is 26 cm. (Take  $\pi = 3.14$ .)

- Ans
- 1. 2432 cm<sup>3</sup>
  - 2. 2564 cm<sup>3</sup>
  - 3. 2512 cm<sup>3</sup>
  - 4. 2498 cm<sup>3</sup>

Question ID : 26433085773  
Status : Answered  
Chosen Option : 3

Section : Part-D-English

Q.1 Select the correct spelling of the underlined word from the given options to make the sentence meaningfully correct.

I am very confidant of my positive result in the examination.

- Ans
- 1. confident
  - 2. confidance
  - 3. confidence
  - 4. confident

Question ID : 26433074063  
Status : Answered  
Chosen Option : 4

Q.2 Select the INCORRECTLY spelt word.

- Ans
- 1. Vaccenation
  - 2. Treasure
  - 3. Consonant
  - 4. Similar

Question ID : 26433073726  
Status : Answered  
Chosen Option : 1

**Q.3** Select the correct idiom that can substitute the italicised group of words in the given sentence.

My mother ensures every corner of our home is *clean and organised* before my grandmother arrives.

- Ans
- 1. root and branch
  - 2. a queer fish
  - 3. a rainy day
  - 4. spick and span

Question ID : 26433084761  
Status : Answered  
Chosen Option : 4

**Q.4** Select the most appropriate ANTONYM of the underlined word to fill in the blank.

Only one of his proposals was accepted in the meeting, while others were \_\_\_\_\_.

- Ans
- 1. fulfilled
  - 2. rejected
  - 3. attended
  - 4. agreed

Question ID : 26433089065  
Status : Answered  
Chosen Option : 2

**Q.5** Select the most appropriate ANTONYM of the given word.  
**Gratification**

- Ans
- 1. Dissatisfaction
  - 2. Growth
  - 3. Blessing
  - 4. Pleasure

Question ID : 26433092953  
Status : Answered  
Chosen Option : 1

**Q.6** Select the most appropriate ANTONYM of the given word.

**Divulgence**

- Ans
- 1. Revelation
  - 2. Assertion
  - 3. Repudiation
  - 4. Confirmation

Question ID : 26433072664  
Status : Not Attempted and Marked For Review  
Chosen Option : --



**Q.7** Select the most appropriate synonym of the underlined word in the following sentence.

They put in their sincere efforts and were lauded for their endeavours.

- Ans**
- 1. efforts
  - 2. passivity
  - 3. fun
  - 4. drop

Question ID : 26433072355  
Status : Answered  
Chosen Option : 1

**Q.8** Select the most appropriate option to fill in the blank.  
                     is the scientific study of material remains like relics and monuments of past human life.

- Ans**
- 1. Theology
  - 2. Archaeology
  - 3. Biology
  - 4. Geology

Question ID : 26433084654  
Status : Answered  
Chosen Option : 2

**Q.9** Select the most appropriate option that can substitute the underlined segment in the given sentence. If there is no need to substitute it, select 'No substitution'.

The travelling gypsies wanted to display they're skilful antics to the crowd.

- Ans**
- 1. No substitution
  - 2. there skilful antics
  - 3. dare skilful antics
  - 4. their skilful antics

Question ID : 26433088740  
Status : Answered  
Chosen Option : 4

**Q.10** Select the most appropriate synonym of the given word.

**Baffle**

- Ans**
- 1. Enlighten
  - 2. Clear
  - 3. Comprehend
  - 4. Amaze

Question ID : 26433072071  
Status : Answered  
Chosen Option : 4

**Q.11** The following sentence has been split into four segments. Identify the segment that contains a grammatical error.

My sister / is come for / a short holiday / from the US.

- Ans**
- 1. from the US
  - 2. a short holiday
  - 3. My sister
  - 4. is come for

Question ID : 26433099634  
Status : Answered  
Chosen Option : 4

**Q.12** Select the most appropriate meaning of the given idiom.

**On the fence**

- Ans**
- 1. On very intimate terms
  - 2. Undaunted by anything
  - 3. Halting between two options
  - 4. Under all conditions

Question ID : 26433073876  
Status : Answered  
Chosen Option : 3

**Q.13** Select the most appropriate synonym of the given word.

**Introvert**

- Ans**
- 1. Forward
  - 2. Outgoing
  - 3. Bold
  - 4. Shy

Question ID : 26433073687  
Status : Answered  
Chosen Option : 4

**Q.14** Select the most appropriate option that can substitute the underlined segment in the given sentence.

Shubhda has not finished to paint the window.

- Ans**
- 1. painting on
  - 2. painting of
  - 3. painting
  - 4. painting with

Question ID : 264330102391  
Status : Answered  
Chosen Option : 3

**Q.15 Select the correct pair of homonyms to fill in the blanks.**

What she \_\_\_\_\_ is that he is a \_\_\_\_\_ person.

- Ans**  1. meant, mean  
 2. grown, groaned  
 3. mean, meant  
 4. growing, grown

Question ID : 26433072109  
Status : Answered  
Chosen Option : 1

**Comprehension:**

In the following passage some words have been deleted. Read the passage carefully and select the most appropriate option to fill in each blank.

The necessity of urban forest is not only to control pollution but also to (1) \_\_\_\_\_ climate change. It (2) \_\_\_\_\_ tempests as well as unforeseen drought. Off late the world is (3) \_\_\_\_\_ flash floods. The (4) \_\_\_\_\_ in Africa has put many countries in famine and children undergo severe malnutrition as a result of famine. Conferences will not provide solutions, only (5) \_\_\_\_\_ action can control these changes in global climate.

**SubQuestion No : 16**

**Q.16 Select the most appropriate option to fill in blank number 1.**

- Ans**  1. hasten  
 2. control  
 3. devise  
 4. create

Question ID : 26433072749  
Status : Answered  
Chosen Option : 2

**Comprehension:**

In the following passage some words have been deleted. Read the passage carefully and select the most appropriate option to fill in each blank.

The necessity of urban forest is not only to control pollution but also to (1) \_\_\_\_\_ climate change. It (2) \_\_\_\_\_ tempests as well as unforeseen drought. Off late the world is (3) \_\_\_\_\_ flash floods. The (4) \_\_\_\_\_ in Africa has put many countries in famine and children undergo severe malnutrition as a result of famine. Conferences will not provide solutions, only (5) \_\_\_\_\_ action can control these changes in global climate.

**SubQuestion No : 17**

**Q.17 Select the most appropriate option to fill in blank number 2.**

- Ans**  1. collides  
 2. confirms  
 3. contributes  
 4. prevents

Question ID : 26433072750  
Status : Answered  
Chosen Option : 4

**Comprehension:**

In the following passage some words have been deleted. Read the passage carefully and select the most appropriate option to fill in each blank.

The necessity of urban forest is not only to control pollution but also to (1) \_\_\_\_\_ climate change. It (2) \_\_\_\_\_ tempests as well as unforeseen drought. Off late the world is (3) \_\_\_\_\_ flash floods. The (4) \_\_\_\_\_ in Africa has put many countries in famine and children undergo severe malnutrition as a result of famine. Conferences will not provide solutions, only (5) \_\_\_\_\_ action can control these changes in global climate.

**SubQuestion No : 18**

**Q.18 Select the most appropriate option to fill in blank number 3.**

- Ans**
- 1. chasing
  - 2. holding
  - 3. seeing
  - 4. experiencing

Question ID : 26433072751  
Status : Answered  
Chosen Option : 4

**Comprehension:**

In the following passage some words have been deleted. Read the passage carefully and select the most appropriate option to fill in each blank.

The necessity of urban forest is not only to control pollution but also to (1) \_\_\_\_\_ climate change. It (2) \_\_\_\_\_ tempests as well as unforeseen drought. Off late the world is (3) \_\_\_\_\_ flash floods. The (4) \_\_\_\_\_ in Africa has put many countries in famine and children undergo severe malnutrition as a result of famine. Conferences will not provide solutions, only (5) \_\_\_\_\_ action can control these changes in global climate.

**SubQuestion No : 19**

**Q.19 Select the most appropriate option to fill in blank number 4.**

- Ans**
- 1. heat
  - 2. temperature
  - 3. fire
  - 4. drought

Question ID : 26433072752  
Status : Answered  
Chosen Option : 4

**Comprehension:**

In the following passage some words have been deleted. Read the passage carefully and select the most appropriate option to fill in each blank.

The necessity of urban forest is not only to control pollution but also to (1) \_\_\_\_\_ climate change. It (2) \_\_\_\_\_ tempests as well as unforeseen drought. Off late the world is (3) \_\_\_\_\_ flash floods. The (4) \_\_\_\_\_ in Africa has put many countries in famine and children undergo severe malnutrition as a result of famine. Conferences will not provide solutions, only (5) \_\_\_\_\_ action can control these changes in global climate.

**SubQuestion No : 20**

**Q.20 Select the most appropriate option to fill in blank number 5.**

- Ans**
- 1. random
  - 2. rare
  - 3. one-time
  - 4. consistent

Question ID : 26433072753  
Status : Answered  
Chosen Option : 4

Q.1 अमंगल सूचक भय 'शक' कहलाता है। इसके एकार्थी शब्द से निम्न वाक्य पूर्ण कीजिए।  
माँ को \_\_\_\_\_ है कि शायद बेटा घर वापस न आए।

- Ans  1. आशंका  
 2. भर्त्सना  
 3. संदेशा  
 4. भावना

Question ID : 26433063083  
Status : Not Answered  
Chosen Option : --

Q.2 निम्न वाक्य में रेखांकित अंश के स्थान पर सबसे उपयुक्त विकल्प कौन-सा होगा?  
मकान गिर जाने का संदेह है।

- Ans  1. उम्मीद  
 2. संदेश  
 3. इच्छा  
 4. डर

Question ID : 26433072583  
Status : Not Answered  
Chosen Option : --

Q.3 नीचे दिए वाक्यांश के लिए उचित शब्द दिए गए विकल्पों में से चुनिए-  
जिसका ज्ञान इंद्रियों द्वारा न हो

- Ans  1. अचिंत्य  
 2. अगोचर  
 3. अग्रशोची  
 4. अज्ञात

Question ID : 26433062386  
Status : Not Answered  
Chosen Option : --

Q.4 'रमेश के घर के पास एक \_\_\_\_\_ है, जिसमें से वह पानी भरता है।' इस वाक्य में रिक्त स्थान की पूर्ति  
शुद्ध शब्द द्वारा कीजिए।

- Ans  1. कुआँ  
 2. कुआ  
 3. कुवा  
 4. कुआ

Question ID : 26433080905  
Status : Not Answered  
Chosen Option : --

Q.5 'सागर की तरह बड़ा होने का कोई महत्त्व नहीं अगर किसी की प्यास न बुझा सके।' वाक्य में प्रयुक्त  
'सागर' शब्द का पर्यायवाची शब्द नहीं है -

- Ans  1. जलधि  
 2. वारिधि  
 3. उदधि  
 4. जगधि

Question ID : 26433069741  
Status : Not Answered  
Chosen Option : --

Q.6 निम्नलिखित में से क्या 'शादी' का समानार्थी शब्द नहीं है?

- Ans
- 1. परिणय
  - 2. विवाह
  - 3. पाणिग्रहण
  - 4. ग्रहण

Question ID : 26433085080  
Status : Not Answered  
Chosen Option : --

Q.7 कर्म करो, फल की चेष्टा मत करो।  
इस वाक्य में 'चेष्टा' के बदले कौन - सा पद उचित होगा ?

- Ans
- 1. प्रयास
  - 2. हासिल
  - 3. आशा
  - 4. प्राप्त

Question ID : 26433062696  
Status : Not Answered  
Chosen Option : --

Q.8 ' \_\_\_\_\_ का जोर लगाना' इस मुहावरे को पूरा करें।

- Ans
- 1. एड़ी चोटी
  - 2. जोर
  - 3. आमने सामने
  - 4. पहाड़ चोटी

Question ID : 26433066819  
Status : Not Answered  
Chosen Option : --

Q.9 पुंडरीक और चंपा के पुष्प बहुत सुंदर होते हैं।  
उपरोक्त वाक्य में प्रयुक्त 'पुंडरीक' शब्द का पर्यायवाची क्या है?

- Ans
- 1. बेला
  - 2. जुही
  - 3. कमल
  - 4. गुलाब

Question ID : 26433080853  
Status : Not Answered  
Chosen Option : --

Q.10 नेहा की आँखों से आँसू टपक पड़ा।  
उपरोक्त वाक्य के किस भाग में अशुद्धि है?

- Ans
- 1. नेहा की
  - 2. आँसू
  - 3. टपक पड़ा।
  - 4. आँखों से

Question ID : 26433079761  
Status : Not Answered  
Chosen Option : --

Q.11 निम्नलिखित विकल्पों में से 'खेत की मूली' मुहावरे का अर्थ क्या है?

- Ans
- 1. गणमान्य व्यक्ति
  - 2. नगण्य व्यक्ति
  - 3. शक्तिशाली व्यक्ति
  - 4. महामानवतावादी होना

Question ID : 26433062551  
Status : Not Answered  
Chosen Option : --

Q.12 निम्न वाक्यांश के एक शब्द क्या होगा?  
विष्णु का उपासक

- Ans
- 1. बांधव
  - 2. सौष्ठव
  - 3. शैव
  - 4. वैष्णव

Question ID : 26433070091  
Status : Not Answered  
Chosen Option : --

Q.13 'स्वागत \_\_\_\_\_ है।'  
उपर्युक्त वाक्य में रिक्त स्थान के लिए उपयुक्त विकल्प निम्न में से क्या होगा?

- Ans
- 1. से अभिप्राय जाने के लिए किया जाने वाला अभिवादन
  - 2. से अभिप्राय आगमन के लिए किया जाने वाला अभिवादन
  - 3. से अभिप्राय मनाने के लिए किया जाने वाला अभिवादन
  - 4. से अभिप्राय रूठकर जाने के लिए किया जाने वाला अभिवादन

Question ID : 26433067048  
Status : Not Answered  
Chosen Option : --

Q.14 निम्नलिखित में से किस वाक्य में प्रेरणार्थक क्रिया है?

- Ans
- 1. सीता राधा से पत्र पढ़वाती है।
  - 2. धर्मद्व पढ़कर सो गया।
  - 3. सोहन ने खाना बना लिया।
  - 4. मुझे पढ़ने दो।

Question ID : 26433085043  
Status : Not Answered  
Chosen Option : --

Q.15 निम्नलिखित विकल्पों में से कौन सा एक वाक्य क्रिया-विशेषण से सम्बन्ध रखता है?

- Ans
- 1. महिमा सो रही है।
  - 2. शेर जंगल में रहता है।
  - 3. रमण रो रहा है।
  - 4. रमेश अच्छा खेल रहा है।

Question ID : 26433062950  
Status : Not Answered  
Chosen Option : --

**Comprehension:**

निम्नलिखित गद्यांश में कुछ शब्दों को हटा दिया गया है। दिए गए विकल्पों की सहायता से रिक्त स्थानों की पूर्ति कीजिए। प्रत्येक संख्या के लिए सबसे उपयुक्त विकल्प का चयन कीजिए।  
यात्रा जीवन की 1. \_\_\_\_\_ है और रुकना एक पड़ाव। परिवारजनों अथवा मित्रों के साथ यात्रा करने का 2. \_\_\_\_\_ ही निराला है। परीक्षा समाप्त होने के 3. \_\_\_\_\_ हम चार मित्रों ने किसी पर्वतीय प्रदेश की यात्रा का निर्णय लिया। पर्वतीय प्रदेश की यात्रा के लिए गर्म कपड़ों की 4. \_\_\_\_\_ थी। परिजनों ने 5. \_\_\_\_\_ दी और समुचित धन भी दिया।

**SubQuestion No : 16****Q.16 रिक्त स्थान 1 की पूर्ति के लिए सबसे उपयुक्त विकल्प का चयन कीजिए।**

- Ans  1. नगरी  
 2. पश्चाताप  
 3. गति  
 4. मार्ग

Question ID : 264330111023

Status : Not Answered

Chosen Option : --

**Comprehension:**

निम्नलिखित गद्यांश में कुछ शब्दों को हटा दिया गया है। दिए गए विकल्पों की सहायता से रिक्त स्थानों की पूर्ति कीजिए। प्रत्येक संख्या के लिए सबसे उपयुक्त विकल्प का चयन कीजिए।  
यात्रा जीवन की 1. \_\_\_\_\_ है और रुकना एक पड़ाव। परिवारजनों अथवा मित्रों के साथ यात्रा करने का 2. \_\_\_\_\_ ही निराला है। परीक्षा समाप्त होने के 3. \_\_\_\_\_ हम चार मित्रों ने किसी पर्वतीय प्रदेश की यात्रा का निर्णय लिया। पर्वतीय प्रदेश की यात्रा के लिए गर्म कपड़ों की 4. \_\_\_\_\_ थी। परिजनों ने 5. \_\_\_\_\_ दी और समुचित धन भी दिया।

**SubQuestion No : 17****Q.17 रिक्त स्थान 2 की पूर्ति के लिए सबसे उपयुक्त विकल्प का चयन कीजिए।**

- Ans  1. साथ  
 2. हाल  
 3. आनंद  
 4. स्वभाव

Question ID : 264330111024

Status : Not Answered

Chosen Option : --

**Comprehension:**

निम्नलिखित गद्यांश में कुछ शब्दों को हटा दिया गया है। दिए गए विकल्पों की सहायता से रिक्त स्थानों की पूर्ति कीजिए। प्रत्येक संख्या के लिए सबसे उपयुक्त विकल्प का चयन कीजिए।  
यात्रा जीवन की 1. \_\_\_\_\_ है और रुकना एक पड़ाव। परिवारजनों अथवा मित्रों के साथ यात्रा करने का 2. \_\_\_\_\_ ही निराला है। परीक्षा समाप्त होने के 3. \_\_\_\_\_ हम चार मित्रों ने किसी पर्वतीय प्रदेश की यात्रा का निर्णय लिया। पर्वतीय प्रदेश की यात्रा के लिए गर्म कपड़ों की 4. \_\_\_\_\_ थी। परिजनों ने 5. \_\_\_\_\_ दी और समुचित धन भी दिया।

**SubQuestion No : 18****Q.18 रिक्त स्थान 3 की पूर्ति के लिए सबसे उपयुक्त विकल्प का चयन कीजिए।**

- Ans  1. किन्तु  
 2. स्थान  
 3. पश्चात  
 4. बीच

Question ID : 264330111025

Status : Not Answered

Chosen Option : --



**Comprehension:**

निम्नलिखित गद्यांश में कुछ शब्दों को हटा दिया गया है। दिए गए विकल्पों की सहायता से रिक्त स्थानों की पूर्ति कीजिए। प्रत्येक संख्या के लिए सबसे उपयुक्त विकल्प का चयन कीजिए।  
यात्रा जीवन की 1. \_\_\_\_\_ है और रुकना एक पड़ाव। परिवारजनों अथवा मित्रों के साथ यात्रा करने का 2. \_\_\_\_\_ ही निराला है। परीक्षा समाप्त होने के 3. \_\_\_\_\_ हम चार मित्रों ने किसी पर्वतीय प्रदेश की यात्रा का निर्णय लिया। पर्वतीय प्रदेश की यात्रा के लिए गर्म कपड़ों की 4. \_\_\_\_\_ थी। परिजनों ने 5. \_\_\_\_\_ दी और समुचित धन भी दिया।

**SubQuestion No : 19**

Q.19 रिक्त स्थान 4 की पूर्ति के लिए सबसे उपयुक्त विकल्प का चयन कीजिए।

- Ans  1. देख-रेख  
 2. आवश्यकता  
 3. मिलावट  
 4. निराशा

Question ID : 264330111026

Status : Not Answered

Chosen Option : --

**Comprehension:**

निम्नलिखित गद्यांश में कुछ शब्दों को हटा दिया गया है। दिए गए विकल्पों की सहायता से रिक्त स्थानों की पूर्ति कीजिए। प्रत्येक संख्या के लिए सबसे उपयुक्त विकल्प का चयन कीजिए।  
यात्रा जीवन की 1. \_\_\_\_\_ है और रुकना एक पड़ाव। परिवारजनों अथवा मित्रों के साथ यात्रा करने का 2. \_\_\_\_\_ ही निराला है। परीक्षा समाप्त होने के 3. \_\_\_\_\_ हम चार मित्रों ने किसी पर्वतीय प्रदेश की यात्रा का निर्णय लिया। पर्वतीय प्रदेश की यात्रा के लिए गर्म कपड़ों की 4. \_\_\_\_\_ थी। परिजनों ने 5. \_\_\_\_\_ दी और समुचित धन भी दिया।

**SubQuestion No : 20**

Q.20 रिक्त स्थान 5 की पूर्ति के लिए सबसे उपयुक्त विकल्प का चयन कीजिए।

- Ans  1. अनुमति  
 2. संतुलन  
 3. उत्साहित  
 4. काम

Question ID : 264330111027

Status : Not Answered

Chosen Option : --

Our Another Best Seller Book for SSC and Other Govt. Exams

**“BLACKBOOK OF GENERAL AWARENESS”**

**(ENGLISH MEDIUM)**

Topper's choice For SSC, Railways, Defence and other competitive exams.

# **BLACKBOOK** of **General Awareness**

January 2023 Edition

- **History**
- **Geography**
- **Indian Polity**
- **Economics**
- **Physics**
- **Chemistry**
- **Biology**
- **Computer**
- **Miscellaneous**

Including Latest  
**400+ Sets**  
of Recent SSC Exams  
by **TCS**



Must Check  
3D Hologram

**25000+** One liners (English Medium)

**NIKHIL GUPTA**

## Constable GD in CAPFs SSF Rifleman GD in Assam Rifles and Sepoy in NCB Examination 2022

Roll Number	@Qmaths Telegram Channel
Candidate Name	@Qmaths Telegram Channel
Venue Name	ION Digital Zone iDZ Tehra
Exam Date	13/02/2023
Exam Time	11:45 AM - 12:45 PM
Subject	Constable GD Examination 2022

### Section : Part-A-General Intelligence and Reasoning

**Q.1** Three different positions of the same dice are shown. Find the number on the face opposite the face showing '4'.

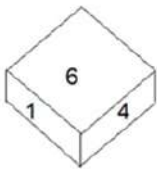


Figure 1

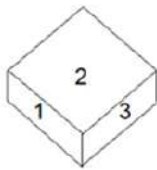


Figure 2

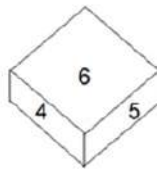


Figure 3

- Ans
- 1. 5
  - 2. 3
  - 3. 6
  - 4. 2

Question ID : 26433089455  
Status : Answered  
Chosen Option : 2

**Q.2** Which letter-cluster will replace the question mark (?) to complete the given series?  
ZYXV, UTSQ, PONL, KJIG, ?

- Ans
- 1. FDCB
  - 2. FEDB
  - 3. FEDC
  - 4. FDBA

Question ID : 26433067719  
Status : Answered  
Chosen Option : 2

**Q.3** In a certain code language, GUIDE is written as 'KWMFI', and SLICE is written as 'WNMEI'. How will 'FAITH' be written in the same code language?

- Ans
- 1. JDNVL
  - 2. JDNWL
  - 3. JCNVL
  - 4. JCMVL

Question ID : 26433067988  
Status : Answered  
Chosen Option : 4

**Q.4** Six students P,Q,R,S,T and U are sitting around a circular table facing the centre. P is sitting second to the right of Q. S is an immediate neighbour of both Q and R. U is sitting third to the left of R. T is an immediate neighbour of both P and R. Who is the immediate neighbour of P and Q?

- Ans**
- 1. S
  - 2. T
  - 3. U
  - 4. R

Question ID : 26433068865  
 Status : Answered  
 Chosen Option : 3

**Q.5** In a certain code language, 'RESULT' is written as 'LUTERS' and 'BARLEY' is written as 'ELYABR'. How will 'HEAVEN' be written in the same code language?

- Ans**
- 1. EVNEHA
  - 2. EANVHE
  - 3. VEENAH
  - 4. AEVNHA

Question ID : 26433079487  
 Status : Answered  
 Chosen Option : 1

**Q.6** Select the option figure which is embedded in the given figure. (Rotation is NOT allowed).

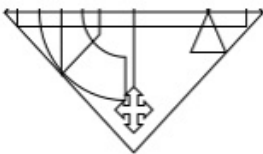


**Ans**

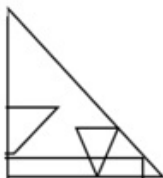
1.



2.



3.



4.



Question ID : 26433089776  
 Status : Answered  
 Chosen Option : 1

**Q.7** Select the option that is related to the third word in the same way as the second word is related to the first word.

(The words must be considered as meaningful English words and must not be related to each other based on the number of letters/number of consonants/vowels in the word)

Mango : Fruit :: Rumba : ?

- Ans
- 1. Sea
  - 2. Dance
  - 3. Tall
  - 4. Food

Question ID : 26433079483  
Status : Answered  
Chosen Option : 2

**Q.8** Which two signs should be interchanged to make the below equation mathematically correct?

$$81 + 3 \div 27 - 8 \times 24 = 25$$

- Ans
- 1.  $\div$  and  $+$
  - 2.  $+$  and  $-$
  - 3.  $\div$  and  $\times$
  - 4.  $\times$  and  $+$

Question ID : 264330117533  
Status : Answered  
Chosen Option : 4

**Q.9** Which of the following numbers will replace the question mark (?) in the given series?  
198, 194, 185, ?, 144, 108

- Ans
- 1. 172
  - 2. 175
  - 3. 169
  - 4. 182

Question ID : 26433076740  
Status : Answered  
Chosen Option : 3

**Q.10** Eight girls P, Q, R, S, U, V, T and W are sitting around a circular table, facing the centre. V is sitting to the immediate left of Q and to the immediate right of U. W is sitting third to the left of V and second to the right of P. R is the immediate neighbour of P and Q. T is sitting fourth to the left of R. Who is sitting third to the left of U?

- Ans
- 1. S
  - 2. V
  - 3. P
  - 4. T

Question ID : 26433091415  
Status : Answered  
Chosen Option : 1

Q.11 Select the number from among the given options that can replace the question mark (?) in the following series.

$$\frac{1}{248}, \frac{1}{217}, \frac{1}{186}, ?, \frac{1}{124}$$

Ans

1.  $\frac{1}{179}$

2.  $\frac{1}{138}$

3.  $\frac{1}{147}$

4.  $\frac{1}{155}$

Question ID : 26433074529

Status : Answered

Chosen Option : 4

Q.12 Which two symbols, from the given options, should be interchanged to make the given equation correct?

$$(9 \div 3 + 169 \times 13) \div 5 - 10 + 16 = 206$$

Ans

1.  $\times$  and  $-$

2.  $\div$  and  $\times$

3.  $+$  and  $-$

4.  $+$  and  $\times$

Question ID : 26433082481

Status : Not Attempted and Marked For Review

Chosen Option : --

Q.13 Select the set in which the numbers are related in the same way as are the numbers of the following set.

(NOTE : Operations should be performed on the whole numbers, without breaking down the numbers into its constituent digits. E.g. 13 – Operations on 13 such as adding /subtracting/multiplying etc. to 13 can be performed. Breaking down 13 into 1 and 3 and then performing mathematical operations on 1 and 3 is NOT allowed)  
(12, 87, 17)  
(19, 117, 20)

Ans

1. (13, 75, 12)

2. (8, 96, 14)

3. (11, 121, 22)

4. (15, 69, 9)

Question ID : 26433076480

Status : Not Attempted and Marked For Review

Chosen Option : --

Q.14 Select the option that is related to the fifth letter-cluster in the same way as the second letter-cluster is related to the first letter-cluster and the fourth letter-cluster is related to the third letter-cluster.

NEAR : PVZP :: GONE: ILMC :: TAXI: ?

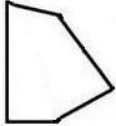
- Ans
- 1. GZCR
  - 2. RCZK
  - 3. VZCM
  - 4. VZCG

Question ID : 26433057484

Status : Answered

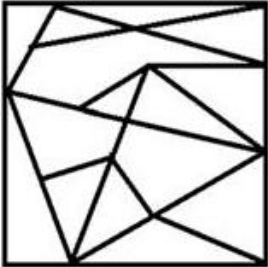
Chosen Option : 1

Q.15 Select the option figure in which the given figure is embedded (rotation is NOT allowed).

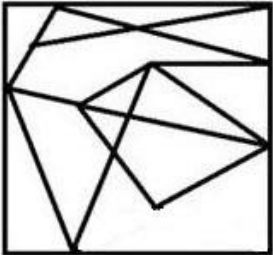


Ans

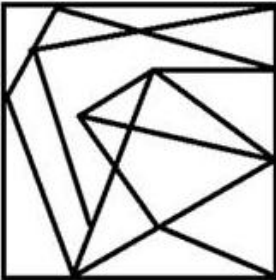
1.



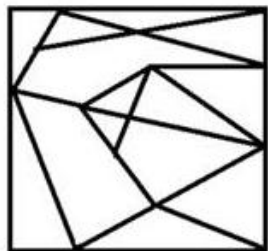
2.



3.



4.



Question ID : 26433069593

Status : Answered

Chosen Option : 3

**Q.16** Which option represents the correct order of the given words as they would appear in the English dictionary?

- 1 danger
- 2 damage
- 3 daring
- 4 darling
- 5 dark

**Ans** ✓ 1. 2,1,3,5,4

✗ 2. 2,3,1,4,5

✗ 3. 2,1,3,4,5

✗ 4. 3,1,2,4,5

Question ID : 26433069291

Status : Answered

Chosen Option : 1

**Q.17** In this question, three statements are given, followed by two conclusions numbered I and II. Assuming the statements to be true, even if they seem to be at variance with commonly known facts, decide which of the conclusions logically follows/follow from the statements.

**Statements:**

All apples are fruits.

All fruits are vegetables.

Some vegetables are fresh.

**Conclusions:**

I. All apples are fresh.

II. Some fruits are fresh.

**Ans** ✗ 1. Only conclusion I follows.

✗ 2. Only conclusion II follows.

✓ 3. Neither conclusion I nor II follows.

✗ 4. Both conclusions I and II follow.

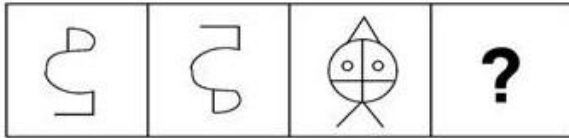
Question ID : 26433070386

Status : Answered

Chosen Option : 3

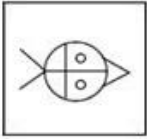


Q.18 Find the options which is related to the third figure in the same manner as second figure is related with the first figure. (First figure is the leftmost figure.)



Ans


✗ 1.



✗ 2.



✗ 3.



✓ 4.



Question ID : 26433078858  
Status : Answered  
Chosen Option : 4

Q.19 In a family, there are 7 members. X and Y are a married couple. X is the father of L. M is the wife of L. C is the brother of L. C has one son O. P is the sister of O. How is C related to P?

Ans ✓ 1. Father

✗ 2. Son

✗ 3. Father's father

✗ 4. Father's brother

Question ID : 26433074598  
Status : Answered  
Chosen Option : 1

Q.20 Which of the following letter-clusters will replace the question mark (?) in the given series?

DHMO, EILN, FJKM, ?, HLIK

Ans ✗ 1. GLKL

✗ 2. GLJL

✓ 3. GKJL

✗ 4. HKJK

Question ID : 26433076437  
Status : Answered  
Chosen Option : 3

Section : Part-B-General Knowledge and General awareness

Q.1 'Paika' is a folk dance performed by members of the society in \_\_\_\_\_.

- Ans
- 1. Maharashtra
  - 2. Tamil Nadu
  - 3. Haryana
  - 4. Jharkhand

Question ID : 26433071664  
Status : Answered  
Chosen Option : 4

Q.2 The \_\_\_\_\_ (ABDM) aims to develop the backbone necessary to support the integrated digital health infrastructure of the country.

- Ans
- 1. Ajay Bharat Digital Mission
  - 2. Ayushman Bharat Digital Management
  - 3. Ayushman Bharat Digital Mission
  - 4. Ayushman Bharat Digital Map

Question ID : 264330116166  
Status : Answered  
Chosen Option : 3

Q.3 Which one of them is NOT a fundamental duty?

- Ans
- 1. Cherishing the ideas of national freedom struggle
  - 2. Respecting the national anthem
  - 3. Respecting the national flag
  - 4. Duty to cast your vote

Question ID : 26433089180  
Status : Answered  
Chosen Option : 1

Q.4 Ziyauddin Barani wrote his chronicle's first version in \_\_\_\_\_ year.

- Ans
- 1. 1356
  - 2. 1288
  - 3. 1358
  - 4. 1402

Question ID : 26433089124  
Status : Not Answered  
Chosen Option : --

Q.5 Dhananjaya Yashwant Chandrachud has been appointed as the \_\_\_\_\_ Chief Justice of India in October 2022.

- Ans
- 1. 30th
  - 2. 20th
  - 3. 40th
  - 4. 50th

Question ID : 264330114922  
Status : Answered  
Chosen Option : 4

**Q.6 Who has been selected as the new Chief Executive Officer of National Intelligence Grid (NATGRID) in August 2022 by the Central Government?**

- Ans**  1. Piyush Goyal  
 2. Ashish Gupta  
 3. Satya Lolla  
 4. Raghu Raman

Question ID : 264330115023  
Status : Not Answered  
Chosen Option : --

**Q.7 The festival of Ram Navami is celebrated in the Hindu month of \_\_\_\_\_.**

- Ans**  1. Kartik  
 2. Phalgun  
 3. Chaitra  
 4. Ashvin

Question ID : 264330115098  
Status : Answered  
Chosen Option : 1

**Q.8 Battle of Plassey was fought in \_\_\_\_\_.**

- Ans**  1. 1764  
 2. 1755  
 3. 1760  
 4. 1757

Question ID : 264330115701  
Status : Answered  
Chosen Option : 4

**Q.9 Which among the following articles of the Indian Constitution relates to the Attorney General of India?**

- Ans**  1. Article 76  
 2. Article 279A  
 3. Article 243ZE  
 4. Article 243I

Question ID : 26433089912  
Status : Answered  
Chosen Option : 1

**Q.10 Husk of a coconut is made of \_\_\_\_\_ tissue.**

- Ans**  1. Sclerenchyma  
 2. Collenchyma  
 3. Xylem  
 4. Parenchyma

Question ID : 264330115203  
Status : Not Answered  
Chosen Option : --

Q.11 \_\_\_\_\_ is a trade policy that doesn't restrict imports or exports.

- Ans
- 1. Fair trade
  - 2. Free trade
  - 3. Local trade
  - 4. Swiss trade

Question ID : 264330115386  
Status : Answered  
Chosen Option : 2

Q.12 Who was the first transgender to be honoured with Padma Shri?

- Ans
- 1. Karthik Chandra Rath
  - 2. Shanti Devi
  - 3. Narthaki Nataraj
  - 4. Rama Murthy

Question ID : 264330115820  
Status : Answered  
Chosen Option : 3

Q.13 Who was the host of the Asian Games 2018?

- Ans
- 1. Singapore
  - 2. India
  - 3. Indonesia
  - 4. China

Question ID : 264330115917  
Status : Answered  
Chosen Option : 4

Q.14 As a Banker to Banks, the \_\_\_\_\_ also acts as the 'lender of the last resort'.

- Ans
- 1. Nationalised bank of India
  - 2. State bank of India
  - 3. Reserve bank of India
  - 4. Union bank of India

Question ID : 264330115320  
Status : Answered  
Chosen Option : 3

Q.15 India won its last ODI Cricket world cup in which year as of 2022?

- Ans
- 1. 2011
  - 2. 2003
  - 3. 2007
  - 4. 1983

Question ID : 264330116248  
Status : Answered  
Chosen Option : 1

**Q.16** The chemical reaction which involves addition of \_\_\_\_\_ or removal of \_\_\_\_\_ is called reduction.

- Ans**
- 1. carbon dioxide, hydrogen
  - 2. carbon dioxide, oxygen
  - 3. hydrogen, oxygen
  - 4. oxygen, hydrogen

Question ID : 264330115157  
Status : **Answered**  
Chosen Option : 3

**Q.17** Match the following types of industries to their examples:

- a) Agro based industry i) Hotels and Restaurants
- b) Public sector industry ii) Iron and steel industry
- c) Private sector industry iii) Silk textile
- d) Mineral based industry iv) BHEL and SAIL

- Ans**
- 1. a-iv,b-iii,c-ii,d-i
  - 2. a-i,b-ii,c-iii,d-iv
  - 3. a-iv,b-ii,c-i,d-iii
  - 4. a-iii,b-iv,c-i,d-ii

Question ID : 264330115567  
Status : **Not Answered**  
Chosen Option : --

**Q.18** Which instrument is used to measure the vibrations during an earthquake?

- Ans**
- 1. Mercalli scale
  - 2. Seismograph
  - 3. Hygrometer
  - 4. Richter Scale

Question ID : 264330116003  
Status : **Answered**  
Chosen Option : 2

**Q.19** What was the slogan of the 2011 Census of India?

- Ans**
- 1. Our Census - Our Pride
  - 2. Our Census - Secured Future
  - 3. India's Census - India's Pride
  - 4. Our Census - Our Future

Question ID : 264330116029  
Status : **Not Answered**  
Chosen Option : --

**Q.20** The Fourth Five Year Plan had began in the year \_\_\_\_\_.

- Ans**
- 1. 1969
  - 2. 1966
  - 3. 1962
  - 4. 1973

Question ID : 264330116119  
Status : **Not Attempted and Marked For Review**  
Chosen Option : --

**Q.1** The average weight of eight persons is 40 kg. If one person is removed, then the average weight becomes 38 kg. The weight of the removed person is:

- Ans
- 1. 38 kg
  - 2. 54 kg
  - 3. 33.25 kg
  - 4. 78 kg

Question ID : 26433087343  
Status : Answered  
Chosen Option : 2

**Q.2** The cost price of an article is 64% of the marked price. Calculate the gain percentage after allowing a discount of 20%.

- Ans
- 1. 35%
  - 2. 25%
  - 3. 30%
  - 4. 20%

Question ID : 26433073015  
Status : Answered  
Chosen Option : 2

**Q.3** Atul alone can complete a work in 114 days. How many persons were required with the same efficiency as Atul to complete the same work in 19 days?

- Ans
- 1. 7
  - 2. 6
  - 3. 5
  - 4. 8

Question ID : 264330116850  
Status : Answered  
Chosen Option : 2

**Q.4** There is a cone with diameter 14 cm and height 12 cm. It is being filled with water at a rate of  $4 \text{ cm}^3$  in every 10 s. How long will it take to fill the cone? (Use  $\pi = \frac{22}{7}$ )

- Ans
- 1. 616 s
  - 2. 1540 s
  - 3. 3080 s
  - 4. 6160 s

Question ID : 26433087414  
Status : Not Attempted and Marked For Review  
Chosen Option : --

**Q.5** The fourth proportional to 2 hours 40 minutes, 1 hours 20 minutes and 10 hours is:

- Ans
- 1. 4 hours
  - 2. 6 hours
  - 3. 5 hours
  - 4. 2 hours

Question ID : 26433081579  
Status : Answered  
Chosen Option : 3

Q.6 The average weight of 34 persons is increased by 3 kg when one person weighing 90 kg is replaced by a new person. Weight of the new person is:

- Ans
- 1. 196 kg
  - 2. 202 kg
  - 3. 190 kg
  - 4. 192 kg

Question ID : 26433079998

Status : **Not Attempted and Marked For Review**

Chosen Option : --

Q.7 Find the difference between the digits of the greatest number that can exactly divide 144 and 216?

- Ans
- 1. 2
  - 2. 4
  - 3. 3
  - 4. 5

Question ID : 264330116639

Status : **Answered**

Chosen Option : 3

Q.8 Two persons P and Q working together can do a piece of work in 36 days. Q alone can do it in 45 days. Q alone start the work and left the work after 5 days. How many days will P take to complete the remaining work?

- Ans
- 1. 180
  - 2. 120
  - 3. 140
  - 4. 160

Question ID : 26433080229

Status : **Answered**

Chosen Option : 4

Q.9 Divide ₹ 5,309 between A and B, so that the amount of A after 4 years is equal to the amount B after 6 years, the interest being compounded at 6% per annum, compounding annually.

- Ans
- 1. ₹2,809, ₹2,500
  - 2. ₹2,759, ₹2,550
  - 3. ₹2,659, ₹2,650
  - 4. ₹2,709, ₹2,600

Question ID : 26433074299

Status : **Not Answered**

Chosen Option : --

Q.10 If the third proportion to 3 and 27 is 'x', then what would be the HCF of 'x' and 27?

- Ans
- 1. 9
  - 2. 27
  - 3. 3
  - 4. 15

Question ID : 26433076008  
Status : Answered  
Chosen Option : 2

Q.11 If  $\frac{5}{8}$  of  $184 \times 15 \div 5 + k = 513 \div 9 + 435$ , then the value of k is:

- Ans
- 1. 192
  - 2. 147
  - 3. 239
  - 4. 136

Question ID : 26433074974  
Status : Answered  
Chosen Option : 2

Q.12 In an election between two candidates, 80% of the voters cast their votes out of which 5% of votes were declared invalid. A candidate got 285000 votes which was 75% of the total valid votes. The total number of voters enrolled for that election was:

- Ans
- 1. 500000
  - 2. 450000
  - 3. 400000
  - 4. 550000

Question ID : 26433087351  
Status : Not Answered  
Chosen Option : --

Q.13 A solid hemisphere has a volume of  $1,152 \pi \text{ cm}^3$ . Find the curved surface area of the hemisphere.

- Ans
- 1.  $344 \text{ cm}^2$
  - 2.  $288 \pi \text{ cm}^2$
  - 3.  $302 \pi \text{ cm}^2$
  - 4.  $294 \text{ cm}^2$

Question ID : 26433075857  
Status : Answered  
Chosen Option : 2

Q.14 The population of a city in the beginning of 2019 was 82,000. Its population is increasing at a rate of 2% annually. What is its population (rounded off to the nearest integer) in the beginning of 2022?

- Ans
- 1. 85000
  - 2. 86789
  - 3. 88000
  - 4. 87019

Question ID : 26433075983  
Status : Answered  
Chosen Option : 1



Q.15 Shlok drives the first 140 km in 3 hrs and the next 180 km in 5 hrs. What is his average speed (in km/h) for the entire trip?

- Ans
- 1. 50
  - 2. 45
  - 3. 30
  - 4. 40

Question ID : 26433075241  
Status : Answered  
Chosen Option : 4

Q.16 A man sells rice at 10% profit and uses a weight that is 20% less than the actual measure. His gain percentage is:

- Ans
- 1.  $37\frac{2}{3}\%$
  - 2.  $37\frac{1}{2}\%$
  - 3.  $37\frac{1}{5}\%$
  - 4.  $37\frac{1}{3}\%$

Question ID : 26433075149  
Status : Answered  
Chosen Option : 3

Q.17 The selling price of a product is such that the seller earns a profit of 20% on the cost price. Determine the ratio of selling price to cost price.

- Ans
- 1.  $\frac{3}{4}$
  - 2.  $\frac{5}{6}$
  - 3.  $\frac{6}{5}$
  - 4.  $\frac{4}{3}$

Question ID : 26433071306  
Status : Answered  
Chosen Option : 3

Q.18 Marked price of an article is Rs. 1600 but Rohan gets a discount of 20 percent. He sells the article for Rs. 1600. Rohan's gain percent is:

- Ans
- 1. 18 percent
  - 2. 22 percent
  - 3. 25 percent
  - 4. 20 percent

Question ID : 264330116735  
Status : Answered  
Chosen Option : 3

**Q.19** A fruit merchant makes a profit of 25% by selling mangoes at a certain price. If he charges Rs.3 more on each mango, he will gain 40%. Find the cost price of one mango

- Ans**
- 1. Rs.30
  - 2. Rs.25
  - 3. Rs.20
  - 4. Rs.15

Question ID : 26433074985

Status : **Not Attempted and Marked For Review**

Chosen Option : --

**Q.20** A boat is moving in still water at a speed of 15 km/h. The speed of the stream is 3 km/h. How much time will the boat take to cover 6 km upstream?

- Ans**
- 1. 30 minutes
  - 2. 15 minutes
  - 3. 20 minutes
  - 4. 45 minutes

Question ID : 26433075986

Status : **Answered**

Chosen Option : 3

Section : **Part-D-English**

**Q.1** In the following passage, some words have been deleted. Read the passage carefully and select the most appropriate option to fill in the blanks.  
Blood transfusion is a procedure that starts with the doctor (1)\_\_\_\_\_ the patients' blood type. In case of a wrong transfusion in the immune (2)\_\_\_\_\_ of an individual, it leads to an infection.

- Ans**
- 1. diagnosing; structure
  - 2. treating; process
  - 3. determining; system
  - 4. settling; order

Question ID : 26433084742

Status : **Answered**

Chosen Option : 3

**Q.2** Select the most appropriate synonym of the underlined word.

Since the last few hours his pulse rate is constant.

- Ans**
- 1. Steady
  - 2. Fickle
  - 3. Pitiful
  - 4. Reflective

Question ID : 26433084682

Status : **Answered**

Chosen Option : 1

**Q.3** Select the most appropriate option to substitute the underlined segment in the given sentence to make it a meaningful sentence. If no substitution is required, select 'No substitution'.

There are hundred of superstitions that survive in various parts of the country, and the study of them is rather amusing.

- Ans**
- 1. There are hundred of superstition that survive in various parts of the country, and the study of them is rather amusing.
  - 2. There are hundred of superstition that survived in various parts of the country, and the study of them is rather amusing.
  - 3. No substitution
  - 4. There are hundreds of superstitions that survive in various parts of the country, and the study of them is rather amusing.

Question ID : 26433092043  
Status : Answered  
Chosen Option : 4

**Q.4** Select the most appropriate meaning of the given idiom.

**Wear your heart on your sleeve**

- Ans**
- 1. Imagining unreal things about others
  - 2. Wearing untidy clothes intentionally
  - 3. Spreading scandals mercilessly
  - 4. Expressing emotions very openly

Question ID : 26433073486  
Status : Answered  
Chosen Option : 4

**Q.5** Select the most appropriate **ANTONYM** of the given word.  
**Lucid**

- Ans**
- 1. Dark
  - 2. Bloat
  - 3. Jolt
  - 4. Stark

Question ID : 26433066087  
Status : Answered  
Chosen Option : 1

**Q.6** Select the most appropriate synonym of the given word.

**Valid**

- Ans**
- 1. Illicit
  - 2. Evil
  - 3. Logical
  - 4. Fake

Question ID : 26433073688  
Status : Answered  
Chosen Option : 3

Q.7 Select the most appropriate ANTONYM of the given word.

Verbose

- Ans  1. Talkative  
 2. Brief  
 3. Polished  
 4. Wordy

Question ID : 26433072665  
Status : Answered  
Chosen Option : 2

Q.8 The given sentence is divided into three segments. Select the option that has the segment with a grammatical error. If there is no error, select 'no error' as your answer.

Ameya won't / eat / any junk food at all.

- Ans  1. Ameya won't  
 2. No error  
 3. eat  
 4. any junk food at all

Question ID : 26433071859  
Status : Answered  
Chosen Option : 1

Q.9 Select the INCORRECTLY spelt word.

- Ans  1. Brandish  
 2. Covardice  
 3. Treachery  
 4. Statutory

Question ID : 26433073506  
Status : Answered  
Chosen Option : 2

Q.10 Select the most appropriate option to fill in the blank.

My uncle's legal \_\_\_\_\_ is his son.

- Ans  1. heir  
 2. hair  
 3. here  
 4. hare

Question ID : 26433073933  
Status : Answered  
Chosen Option : 1

Q.11 Select the most appropriate spelling that can correctly substitute the misspelt underlined segment in the given sentence.

The thick dirt on the building was the acretion of ages.

- Ans  1. accration  
 2. accretion  
 3. acration  
 4. acretion

Question ID : 26433071936  
Status : Answered  
Chosen Option : 2

Q.12 Select the most appropriate option to fill in the blank.

I have made the basket for going to the picnic and I've packed some sandwiches

- Ans
- 1. two
  - 2. too
  - 3. to
  - 4. toot

Question ID : 26433084617  
Status : Answered  
Chosen Option : 2

Q.13 Select the most appropriate homonym to fill in the blank.  
The authorities \_\_\_\_\_ the unregistered companies.

- Ans
- 1. sees
  - 2. seize
  - 3. seas
  - 4. cease

Question ID : 26433058519  
Status : Answered  
Chosen Option : 2

Q.14 Select the most appropriate meaning of the given idiom.

To add fuel to fire.

- Ans
- 1. To make a bad situation worse
  - 2. To speak against someone
  - 3. To fight over trivial thing
  - 4. To start the conversation

Question ID : 26433072537  
Status : Answered  
Chosen Option : 1

Q.15 Substitute the underlined words with the option that is closest in meaning to it.

Rahul likes to keep his house spic and span.

- Ans
- 1. shabby and dirty
  - 2. neat and clean
  - 3. bright and glory
  - 4. rich and famous

Question ID : 26433088952  
Status : Answered  
Chosen Option : 2

**Comprehension:**

In the following passage some words have been deleted. Fill in the blanks with the help of the alternatives given. Select the most appropriate option for each number.

Ayurveda views a person more than bones and muscle. According to it, you are a spirit that represents the *vata*, *pitta*, and *kapha* elements. Ayurveda (1) \_\_\_\_ impacts your health by bringing an (2) \_\_\_\_ in your body, mind, and soul. By consuming healthy food according to the body's constitution, and performing yoga stretches, and meditation, you will start to see (3) \_\_\_\_ results. Ayurveda impacts the body at the deepest cellular levels. It helps in healing, and (4) \_\_\_\_ of cells, to protect it from a wide range of ailments naturally. According to Ayurveda, when a person eats wrong food, then "ama" or toxin gets deposited in the body. If this waste-product is not eliminated from the body soon, then it starts to spread in different areas of the body. This is the major reason behind experiencing an (5) \_\_\_\_ in the body.

**SubQuestion No : 16**

**Q.16** Select the most appropriate option to fill in blank 1.

- Ans  1. casually  
 2. positively  
 3. negatively  
 4. probably

Question ID : 26433073176  
Status : Answered  
Chosen Option : 2

**Comprehension:**

In the following passage some words have been deleted. Fill in the blanks with the help of the alternatives given. Select the most appropriate option for each number.

Ayurveda views a person more than bones and muscle. According to it, you are a spirit that represents the *vata*, *pitta*, and *kapha* elements. Ayurveda (1) \_\_\_\_ impacts your health by bringing an (2) \_\_\_\_ in your body, mind, and soul. By consuming healthy food according to the body's constitution, and performing yoga stretches, and meditation, you will start to see (3) \_\_\_\_ results. Ayurveda impacts the body at the deepest cellular levels. It helps in healing, and (4) \_\_\_\_ of cells, to protect it from a wide range of ailments naturally. According to Ayurveda, when a person eats wrong food, then "ama" or toxin gets deposited in the body. If this waste-product is not eliminated from the body soon, then it starts to spread in different areas of the body. This is the major reason behind experiencing an (5) \_\_\_\_ in the body.

**SubQuestion No : 17**

**Q.17** Select the most appropriate option to fill in blank 2.

- Ans  1. foundation  
 2. equilibrium  
 3. basis  
 4. substance

Question ID : 26433073177  
Status : Answered  
Chosen Option : 2

**Comprehension:**

In the following passage some words have been deleted. Fill in the blanks with the help of the alternatives given. Select the most appropriate option for each number.

Ayurveda views a person more than bones and muscle. According to it, you are a spirit that represents the *vata*, *pitta*, and *kapha* elements. Ayurveda (1) \_\_\_\_ impacts your health by bringing an (2) \_\_\_\_ in your body, mind, and soul. By consuming healthy food according to the body's constitution, and performing yoga stretches, and meditation, you will start to see (3) \_\_\_\_ results. Ayurveda impacts the body at the deepest cellular levels. It helps in healing, and (4) \_\_\_\_ of cells, to protect it from a wide range of ailments naturally. According to Ayurveda, when a person eats wrong food, then "ama" or toxin gets deposited in the body. If this waste-product is not eliminated from the body soon, then it starts to spread in different areas of the body. This is the major reason behind experiencing an (5) \_\_\_\_ in the body.

**SubQuestion No : 18**

**Q.18 Select the most appropriate option to fill in blank 3.**

**Ans**  1. invisible

2. gentle

3. sluggish

4. visible

Question ID : 26433073178

Status : Answered

Chosen Option : 4

**Comprehension:**

In the following passage some words have been deleted. Fill in the blanks with the help of the alternatives given. Select the most appropriate option for each number.

Ayurveda views a person more than bones and muscle. According to it, you are a spirit that represents the *vata*, *pitta*, and *kapha* elements. Ayurveda (1) \_\_\_\_ impacts your health by bringing an (2) \_\_\_\_ in your body, mind, and soul. By consuming healthy food according to the body's constitution, and performing yoga stretches, and meditation, you will start to see (3) \_\_\_\_ results. Ayurveda impacts the body at the deepest cellular levels. It helps in healing, and (4) \_\_\_\_ of cells, to protect it from a wide range of ailments naturally. According to Ayurveda, when a person eats wrong food, then "ama" or toxin gets deposited in the body. If this waste-product is not eliminated from the body soon, then it starts to spread in different areas of the body. This is the major reason behind experiencing an (5) \_\_\_\_ in the body.

**SubQuestion No : 19**

**Q.19 Select the most appropriate option to fill in blank 4.**

**Ans**  1. regeneration

2. benefit

3. degeneration

4. loss

Question ID : 26433073179

Status : Answered

Chosen Option : 1

**Comprehension:**

In the following passage some words have been deleted. Fill in the blanks with the help of the alternatives given. Select the most appropriate option for each number.

Ayurveda views a person more than bones and muscle. According to it, you are a spirit that represents the *vata*, *pitta*, and *kapha* elements. Ayurveda (1) \_\_\_\_\_ impacts your health by bringing an (2) \_\_\_\_\_ in your body, mind, and soul. By consuming healthy food according to the body's constitution, and performing yoga stretches, and meditation, you will start to see (3) \_\_\_\_\_ results. Ayurveda impacts the body at the deepest cellular levels. It helps in healing, and (4) \_\_\_\_\_ of cells, to protect it from a wide range of ailments naturally. According to Ayurveda, when a person eats wrong food, then "ama" or toxin gets deposited in the body. If this waste-product is not eliminated from the body soon, then it starts to spread in different areas of the body. This is the major reason behind experiencing an (5) \_\_\_\_\_ in the body.

**SubQuestion No : 20**

**Q.20** Select the most appropriate option to fill in blank 5.

- Ans
- 1. weakness
  - 2. potential
  - 3. energy
  - 4. imbalance

Question ID : 26433073180  
Status : Answered  
Chosen Option : 4

**Section : Part-D-Hindi**

**Q.1** 'वसंत ऋतु में वृक्षों में नव पल्लव आते हैं।' वाक्य में प्रयुक्त 'पल्लव' शब्द का अर्थ है-

- Ans
- 1. पत्ता
  - 2. डाली
  - 3. फूल
  - 4. शाखा

Question ID : 26433069742  
Status : Not Answered  
Chosen Option : --

**Q.2** 'कुत्ता रेंकता है।' इस वाक्य में रेखांकित शब्द के स्थान पर उपयुक्त शब्द क्या होगा?

- Ans
- 1. चहचहाता
  - 2. गुटरगू करता
  - 3. भौंकता
  - 4. मिमियाता

Question ID : 26433062779  
Status : Not Answered  
Chosen Option : --

**Q.3** 'अतिवृष्टि' का सही विलोम निम्न में से क्या है?

- Ans
- 1. बाढ़
  - 2. निवृष्टि
  - 3. अनावृष्टि
  - 4. अवृष्टि

Question ID : 26433062924  
Status : Not Answered  
Chosen Option : --



Q.4 निम्नलिखित विकल्पों में से 'साधारण या व्यापक नियम के विरुद्ध चीजें' वाक्यांश के लिए एक सार्थक शब्द क्या होगा ?

- Ans
- 1. नीरवता
  - 2. अपवाद
  - 3. अपूर्व
  - 4. आलोचक

Question ID : 26433062475  
Status : Not Answered  
Chosen Option : --

Q.5 'क्रम के अनुसार' वाक्यांश के लिए सार्थक शब्द है-

- Ans
- 1. सक्रम
  - 2. यथाक्रम
  - 3. क्रमांक
  - 4. असंख्य

Question ID : 26433065869  
Status : Not Answered  
Chosen Option : --

Q.6 निम्नलिखित वाक्य के रिक्त स्थान में सबसे उपयुक्त मुहावरा क्या होगा?  
'श्रवण कुमार अपने माता पिता के लिए \_\_\_\_\_ थे।'

- Ans
- 1. दाढ़ी में तिनका
  - 2. अंधे की लकड़ी
  - 3. काठ के उल्लू
  - 4. हाथी के दांत

Question ID : 26433066735  
Status : Not Answered  
Chosen Option : --

Q.7 वर्तनी की दृष्टि से अशुद्ध वाक्य का चयन कीजिए-

- Ans
- 1. मैं आपसे छुट्टी के लिए प्रार्थना करता हूँ।
  - 2. मैंने उसकी अस्वस्थता के बारे में सुना था।
  - 3. वह अपनी उम्र के तीसवें वर्ष तक अविवाहित था।
  - 4. राम का शत्रू रावण मारा गया।

Question ID : 26433062892  
Status : Not Answered  
Chosen Option : --

Q.8 निम्नलिखित विकल्पों में से किस एक वाक्य में क्रिया सम्बन्धी अशुद्धि है?

- Ans
- 1. चोरी करते हुए पकड़े जाने पर उस पर घड़ों पानी पड़ गया।
  - 2. वह लड़का दौड़ता है।
  - 3. दूसरों के चरित्र पर अकारण ही कीचड़ नहीं डालना चाहिए।
  - 4. कृपया उत्तर शीघ्र दें।

Question ID : 26433091233  
Status : Not Answered  
Chosen Option : --

Q.9 'साहित्य से संबंधित' वाक्यांश के लिए एक शब्द होगा-

- Ans  1. सरोकार  
 2. साहित्यिक  
 3. दर्पण  
 4. सामाजिक

Question ID : 26433065734  
Status : Not Answered  
Chosen Option : --

Q.10 अशुद्ध वर्तनी वाला वाक्य पहचानिए।

- Ans  1. बहुत भाग - दउड़ के बाद कलेज में उनका प्रवेश हुआ।  
 2. मेरी पत्नी बीमार है।  
 3. दादी की मृत्यु से हमें बड़ा शोक हुआ।  
 4. मुझे तुमसे मिलने की उत्सुकता थी।

Question ID : 26433063064  
Status : Not Answered  
Chosen Option : --

Q.11 निम्नलिखित वाक्य में रेखांकित खंड के स्थान पर प्रयुक्त होने वाले सबसे उपयुक्त विकल्प का चयन कीजिए।

उसके चाची का लड़की हुई है।

- Ans  1. से  
 2. में  
 3. को  
 4. के

Question ID : 26433079571  
Status : Not Answered  
Chosen Option : --

Q.12 निम्नलिखित विकल्पों में से किस एक वाक्य में विशेषण का उचित प्रयोग किया गया है?

- Ans  1. पानी से नहाओ।  
 2. रोज स्कूल जाओ।  
 3. मीठा फल खाओ।  
 4. खाना खाओ।

Question ID : 26433062961  
Status : Not Answered  
Chosen Option : --

Q.13 निम्नलिखित विकल्पों में से 'धुन लगना' मुहावरे का अर्थ क्या है?

- Ans  1. भय होना  
 2. निराश होना  
 3. खुश होना  
 4. क्षय होना

Question ID : 26433062552  
Status : Not Answered  
Chosen Option : --

Q.14 सृष्टि के निर्माता ब्रह्मा हैं, तो विनाशक \_\_\_\_\_ ।  
'शिव' के पर्याय से उक्त वाक्य में रिक्त स्थान की पूर्ति कीजिए।

- Ans
- 1. मार्तण्ड
  - 2. लोकेश
  - 3. विभु
  - 4. त्रिलोचन

Question ID : 26433084990  
Status : Not Answered  
Chosen Option : --

Q.15 "भिखारी को देखकर उसे उस पर \_\_\_\_\_ आ गई।"  
उपरोक्त वाक्य में रिक्त स्थान पर निम्न में से किस शब्द का प्रयोग सर्वाधिक उपयुक्त होगा?

- Ans
- 1. अनुकंपा
  - 2. माया
  - 3. कृपा
  - 4. दया

Question ID : 26433067005  
Status : Not Answered  
Chosen Option : --

**Comprehension:**

निम्नलिखित गद्यांश में कुछ शब्दों को हटा दिया गया है। दिए गए विकल्पों की सहायता से रिक्त स्थानों की पूर्ति कीजिए। प्रत्येक संख्या के लिए सबसे उपयुक्त विकल्प का चयन करें।  
संसार में सैकड़ों प्रकार के प्राणी हैं, इनमें मानव जीवन 1. \_\_\_\_\_ है। वह सोच-समझ कर 2. \_\_\_\_\_ लेता है कि उसे क्या करना चाहिए तथा उसके लिए क्या उपयोगी है जो उसे अपने 3. \_\_\_\_\_ तक पहुँचा दे। उसके जीवन की 4. \_\_\_\_\_ तभी है जब वह आकांक्षा या लक्ष्य लेकर जीवन व्यतीत करें। जीवन एक प्रकार की 5. \_\_\_\_\_ है, जहाँ नित्य नए-नए अनुभव होते हैं।

**SubQuestion No : 16**

Q.16 रिक्त स्थान 1 की पूर्ति के लिए सबसे उपयुक्त विकल्प का चयन कीजिए।

- Ans
- 1. प्रारंभ
  - 2. सर्वश्रेष्ठ
  - 3. अधूरा
  - 4. पूरा

Question ID : 264330111029  
Status : Not Answered  
Chosen Option : --

**Comprehension:**

निम्नलिखित गद्यांश में कुछ शब्दों को हटा दिया गया है। दिए गए विकल्पों की सहायता से रिक्त स्थानों की पूर्ति कीजिए। प्रत्येक संख्या के लिए सबसे उपयुक्त विकल्प का चयन करें।  
संसार में सैकड़ों प्रकार के प्राणी हैं, इनमें मानव जीवन 1. \_\_\_\_\_ है। वह सोच-समझ कर 2. \_\_\_\_\_ लेता है कि उसे क्या करना चाहिए तथा उसके लिए क्या उपयोगी है जो उसे अपने 3. \_\_\_\_\_ तक पहुँचा दे। उसके जीवन की 4. \_\_\_\_\_ तभी है जब वह आकांक्षा या लक्ष्य लेकर जीवन व्यतीत करें। जीवन एक प्रकार की 5. \_\_\_\_\_ है, जहाँ नित्य नए-नए अनुभव होते हैं।

**SubQuestion No : 17**

Q.17 रिक्त स्थान 2 की पूर्ति के लिए सबसे उपयुक्त विकल्प का चयन कीजिए।

- Ans
- 1. उपचार
  - 2. अनिवार्य
  - 3. निर्णय
  - 4. देखता

Question ID : 264330111030  
Status : Not Answered  
Chosen Option : --

**Comprehension:**

निम्नलिखित गद्यांश में कुछ शब्दों को हटा दिया गया है। दिए गए विकल्पों की सहायता से रिक्त स्थानों की पूर्ति कीजिए। प्रत्येक संख्या के लिए सबसे उपयुक्त विकल्प का चयन करें।  
संसार में सैकड़ों प्रकार के प्राणी हैं, इनमें मानव जीवन 1. \_\_\_\_\_ है। वह सोच-समझ कर 2. \_\_\_\_\_ लेता है कि उसे क्या करना चाहिए तथा उसके लिए क्या उपयोगी है जो उसे अपने 3. \_\_\_\_\_ तक पहुँचा दे। उसके जीवन की 4. \_\_\_\_\_ तभी है जब वह आकांक्षा या लक्ष्य लेकर जीवन व्यतीत करें। जीवन एक प्रकार की 5. \_\_\_\_\_ है, जहाँ नित्य नए-नए अनुभव होते हैं।

**SubQuestion No : 18****Q.18 रिक्त स्थान 3 की पूर्ति के लिए सबसे उपयुक्त विकल्प का चयन कीजिए।**

- Ans
- 1. कर्तव्य
  - 2. प्रारंभ
  - 3. लक्ष्य
  - 4. सीमा

Question ID : 264330111031

Status : Not Answered

Chosen Option : --

**Comprehension:**

निम्नलिखित गद्यांश में कुछ शब्दों को हटा दिया गया है। दिए गए विकल्पों की सहायता से रिक्त स्थानों की पूर्ति कीजिए। प्रत्येक संख्या के लिए सबसे उपयुक्त विकल्प का चयन करें।  
संसार में सैकड़ों प्रकार के प्राणी हैं, इनमें मानव जीवन 1. \_\_\_\_\_ है। वह सोच-समझ कर 2. \_\_\_\_\_ लेता है कि उसे क्या करना चाहिए तथा उसके लिए क्या उपयोगी है जो उसे अपने 3. \_\_\_\_\_ तक पहुँचा दे। उसके जीवन की 4. \_\_\_\_\_ तभी है जब वह आकांक्षा या लक्ष्य लेकर जीवन व्यतीत करें। जीवन एक प्रकार की 5. \_\_\_\_\_ है, जहाँ नित्य नए-नए अनुभव होते हैं।

**SubQuestion No : 19****Q.19 रिक्त स्थान 4 की पूर्ति के लिए सबसे उपयुक्त विकल्प का चयन कीजिए।**

- Ans
- 1. विफलता
  - 2. महत्त्वपूर्ण
  - 3. निश्चय
  - 4. सार्थकता

Question ID : 264330111032

Status : Not Answered

Chosen Option : --

**Comprehension:**

निम्नलिखित गद्यांश में कुछ शब्दों को हटा दिया गया है। दिए गए विकल्पों की सहायता से रिक्त स्थानों की पूर्ति कीजिए। प्रत्येक संख्या के लिए सबसे उपयुक्त विकल्प का चयन करें।  
संसार में सैकड़ों प्रकार के प्राणी हैं, इनमें मानव जीवन 1. \_\_\_\_\_ है। वह सोच-समझ कर 2. \_\_\_\_\_ लेता है कि उसे क्या करना चाहिए तथा उसके लिए क्या उपयोगी है जो उसे अपने 3. \_\_\_\_\_ तक पहुँचा दे। उसके जीवन की 4. \_\_\_\_\_ तभी है जब वह आकांक्षा या लक्ष्य लेकर जीवन व्यतीत करें। जीवन एक प्रकार की 5. \_\_\_\_\_ है, जहाँ नित्य नए-नए अनुभव होते हैं।

**SubQuestion No : 20****Q.20 रिक्त स्थान 5 की पूर्ति के लिए सबसे उपयुक्त विकल्प का चयन कीजिए।**

- Ans
- 1. प्रयोगशाला
  - 2. किताबशाला
  - 3. कृतज्ञता
  - 4. योग्यता

Question ID : 264330111033

Status : Not Answered

Chosen Option : --

# Constable GD in CAPFs SSF Rifleman GD in Assam Rifles and Sepoy in NCB Examination 2022

Roll Number	examstocks.com
Candidate Name	examstocks.com
Venue Name	iON Digital Zone iDZ5 Patliputra
Exam Date	13/02/2023
Exam Time	2:30 PM - 3:30 PM
Subject	Constable GD Examination 2022

## Section : Part-A-General Intelligence and Reasoning

**Q.1** Six students Melanie, Sucheta, Martin, Suzanne, Danish and Jacob are sitting around a circular table facing the centre. Melanie is sitting second to the right of Sucheta. Suzanne is an immediate neighbour of Melanie and Sucheta. Danish is sitting third to the right of Suzanne. Martin is an immediate neighbour of Sucheta and Danish. Jacob is sitting third to the right of Sucheta. Who is sitting between Martin and Suzanne?

- Ans
- 1. Jacob
  - 2. Melanie
  - 3. Sucheta
  - 4. Danish

Question ID : 26433081789  
Status : Answered  
Chosen Option : 3

**Q.2** Which of the following numbers will replace the question marks (?) in the given series?  
99, 110, 132, ?, 209, ?, 330

- Ans
- 1. 165, 264
  - 2. 188, 294
  - 3. 168, 268
  - 4. 169, 288

Question ID : 26433070226  
Status : Answered  
Chosen Option : 1

**Q.3** In a certain code language, 'FOREST' is written as 'SPGVUG' and 'FRENCH' is written as 'FSGJEP'. How will 'FRIEND' be written as in that language?

- Ans
- 1. IRFDNE
  - 2. IRFFPG
  - 3. JSGDNE
  - 4. JSGFPG

Question ID : 26433090045  
Status : Answered  
Chosen Option : 4

Q.4 There are six members of a family- A, B, C, D, E and F. D has 3 sons A, B and C. D is not the father of the children. B has one son E. C has one daughter F. How is B related to F?

- Ans  1. Father's brother  
 2. Son  
 3. Father's father  
 4. Father

Question ID : 26433074595  
Status : Answered  
Chosen Option : 1

Q.5 Select the option that is related to the third term in the same way as the second term is related to the first term.  
ELECTRIC : GNGEVTKE :: NUCLEAR : ?

- Ans  1. PWENGCT  
 2. MTBKDZQ  
 3. PDZQDBS  
 4. OVDMDBS

Question ID : 26433067261  
Status : Answered  
Chosen Option : 1

Q.6 Three statements are given followed by three conclusions numbered I, II and III. Assuming the statements to be true, even if they seem to be at variance with commonly known facts, decide which of the conclusions logically follow(s) from the statements.

Statements:

All hands are fingers.

All legs are fingers.

All fingers are toes.

Conclusions:

I. All legs are toes.

II. All toes are hands.

III. Some toes are legs.

- Ans  1. Only conclusions I and II follow  
 2. Only conclusions II and III follow  
 3. Only conclusions I and III follow  
 4. All conclusions follow

Question ID : 26433082313  
Status : Answered  
Chosen Option : 3

Q.7 Select the correct combination of mathematical signs to sequentially replace the \* signs and to balance the given equation.  
 $420 * 42 * 10 * 2 * 102$

- Ans
- 1. =, +, x, ÷
  - 2. ÷, x, +, =
  - 3. ÷, +, =, x
  - 4. x, ÷, =, +

Question ID : 26433094987  
Status : Answered  
Chosen Option : 2

Q.8 Select the option that is related to the third word in the same way as the second word is related to the first word.  
(The words must be considered as meaningful English words and must not be related to each other based on the number of letters/number of consonants/vowels in the word)  
Tiger : India :: Giant Panda : ?

- Ans
- 1. Taiwan
  - 2. Vietnam
  - 3. China
  - 4. Russia

Question ID : 26433079480  
Status : Not Answered  
Chosen Option : --

Q.9 Select the correct mirror image of the given figure when the mirror is placed at MN as shown below.

biBLioGraPHy

M

N

- Ans
- 1. yIH9rGoiidd
  - 2. yIH9rGoiidd
  - 3. YH9rGoiidd
  - 4. YH9rGoiidd

Question ID : 26433085547  
Status : Answered  
Chosen Option : 1

Q.10 Select the option that is related to the third term in the same way as the second term is related to the first term and the sixth term is related to the fifth term.

13 : 196 :: 16 : ? :: 17 : 324

- Ans
- 1. 289
  - 2. 298
  - 3. 258
  - 4. 292

Question ID : 26433069096  
Status : Answered  
Chosen Option : 1

Q.11 Which of the following terms will replace the question mark (?) in the given series?  
MDVG, NFYK, OHBO, PJES, ?

- Ans
- 1. QIGQ
  - 2. QKGU
  - 3. QLFU
  - 4. QLHW

Question ID : 26433069447  
Status : Answered  
Chosen Option : 4

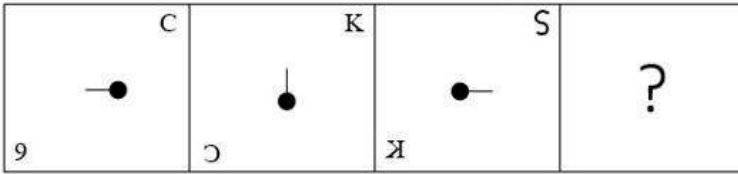
Q.12 Seven people, A, B, C, D, E, F and G are sitting in a straight row, facing north. A sits second from the left. Only two people sit between A and C. Only three people sit between D and F and D is an immediate neighbour of A. B is an immediate neighbour of D and E is not an immediate neighbour of C. Who sits to the immediate left of F?

- Ans
- 1. E
  - 2. B
  - 3. C
  - 4. G

Question ID : 26433056933  
Status : Answered  
Chosen Option : 4

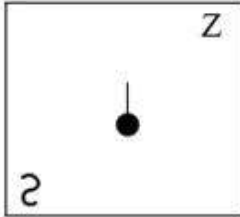


Q.13 Select the figure from among the given options that can replace the question mark (?) in the following series.

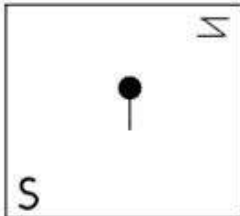


Ans

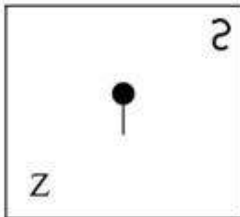
✗ 1.



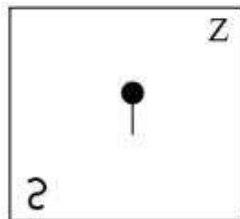
✗ 2.



✗ 3.



✓ 4.



Question ID : 26433080763

Status : Answered

Chosen Option : 4

Q.14 Which of the following numbers will replace the question mark (?) in the given series?  
2, 5, 18, 41, ?

Ans ✓ 1. 74

✗ 2. 43

✗ 3. 31

✗ 4. 67

Question ID : 26433082738

Status : Answered

Chosen Option : 1

Q.15 Which of the following letter-clusters will replace the question mark (?) in the given series?

PDYI, MGVL, ?, GMPR, DPMU

- Ans
- 1. KJRO
  - 2. JJTP
  - 3. IJSO
  - 4. JJSO

Question ID : 26433076434  
Status : Answered  
Chosen Option : 4

Q.16 In a certain code language, 'COGENT' is written as 'FMJCQR' and 'BRINK' is written as 'EPLLN'. How will 'RANKED' be written in that language?

- Ans
- 1. UZRJGA
  - 2. NVLOZA
  - 3. UYQIHB
  - 4. MXCHVI

Question ID : 26433069462  
Status : Answered  
Chosen Option : 3

Q.17 Which two signs should be interchanged to make the below equation mathematically correct?

$$24 + 72 \div 12 \times 36 - 12 = 168$$

- Ans
- 1. + and -
  - 2.  $\times$  and +
  - 3.  $\times$  and +
  - 4. + and -

Question ID : 264330117530  
Status : Answered  
Chosen Option : 2

Q.18 Select the option that represents the correct order of the given words as they would appear in an English dictionary.

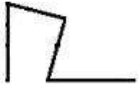
1. PRISM
2. PRINT
3. PRIOR
4. PRISE
5. PROBE
6. PRIZE

- Ans
- 1. 5, 6, 4, 1, 2, 3
  - 2. 1, 3, 2, 4, 6, 5
  - 3. 2, 3, 4, 1, 6, 5
  - 4. 3, 2, 4, 1, 6, 5

Question ID : 26433079382  
Status : Answered  
Chosen Option : 3

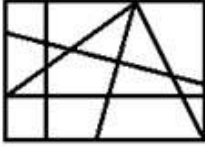
Q.19

Select the option figure in which the given figure is embedded as its part (rotation is not allowed).

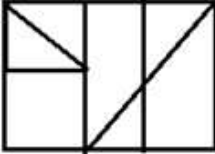


Ans

✓ 1.



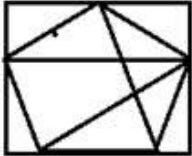
✗ 2.



✗ 3.



✗ 4.



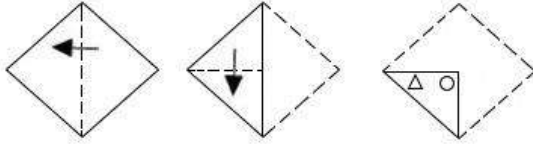
Question ID : 26433069542

Status : Answered

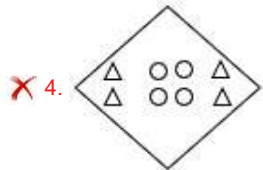
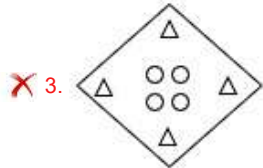
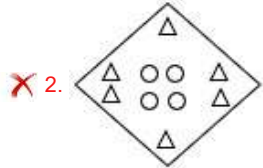
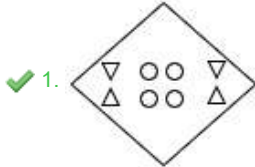
Chosen Option : 1

Blackbook

Q.20 A paper is folded and cut as shown below. How will it appear when unfolded?



Ans



Question ID : 26433090092  
Status : Answered  
Chosen Option : 1

Section : Part-B-General Knowledge and General awareness

Q.1 Who became Punjab's Chief Minister after election in 2022?

- Ans
- ✗ 1. Amarinder Singh
  - ✗ 2. Charanjit Singh Channi
  - ✓ 3. Bhagwant Mann
  - ✗ 4. Parkash Singh Badal

Question ID : 264330115020  
Status : Answered  
Chosen Option : 3

**Q.2** The Narmada river rises in which of the following place?

- Ans
- 1. Satpura
  - 2. Nasik
  - 3. Amarkantak hills
  - 4. Mahabaleshwar

Question ID : 264330116000  
Status : Answered  
Chosen Option : 3

**Q.3** Which of the following Indian states does not share its border with China?

- Ans
- 1. Sikkim
  - 2. Arunachal Pradesh
  - 3. Himachal Pradesh
  - 4. Uttar Pradesh

Question ID : 264330116101  
Status : Answered  
Chosen Option : 4

**Q.4** The five-day long Ganga Mahotsav is celebrated in which city of Uttar Pradesh?

- Ans
- 1. Varanasi
  - 2. Lucknow
  - 3. Noida
  - 4. Kanpur

Question ID : 26433092392  
Status : Answered  
Chosen Option : 1

**Q.5** Wangala is the famous folk dance of \_\_\_\_\_.

- Ans
- 1. Mizoram
  - 2. Bihar
  - 3. West Bengal
  - 4. Meghalaya

Question ID : 26433071661  
Status : Answered  
Chosen Option : 4

**Q.6** The Code of Criminal Procedure was enacted in year \_\_\_\_\_ in India.

- Ans
- 1. 1971
  - 2. 1975
  - 3. 1973
  - 4. 1977

Question ID : 264330116209  
Status : Answered  
Chosen Option : 1

Q.7 The term 'shooting guard' is used in which of the following games/sports?

- Ans  1. Basketball  
 2. Tennis  
 3. Volleyball  
 4. Table tennis

Question ID : 26433071573  
Status : Not Answered  
Chosen Option : --

Q.8 In the Tamil region, landless labourers, including slaves, were known as \_\_\_\_\_ during Sangam age.

- Ans  1. kadaiyyar and adimai  
 2. vellalar and adimai  
 3. kadaiyyar and uzharar  
 4. vellalar and uzharar

Question ID : 26433085226  
Status : Not Answered  
Chosen Option : --

Q.9 As of November 2022, who is the Union Minister for Law and Justice in India?

- Ans  1. Devendra Fadnis  
 2. Kiren Rijju  
 3. Ashwini Vaishnav  
 4. Piyush Goyal

Question ID : 264330114965  
Status : Answered  
Chosen Option : 2

Q.10 Who was responsible for the Jallianwala Bagh massacre?

- Ans  1. General Dawson  
 2. General Dyer  
 3. General Haunters  
 4. General Panters

Question ID : 264330115698  
Status : Answered  
Chosen Option : 2

Q.11 \_\_\_\_\_ is an electronic payment system that enables customers of a bank or other financial institution to conduct a range of financial transactions through the financial institution's website.

- Ans
- 1. Internet banking
  - 2. Interstate banking
  - 3. Single entry system
  - 4. Inter corporate banking

Question ID : 264330115317  
Status : Answered  
Chosen Option : 1

Q.12 The first ever Khelo India University Games were organised in which of the following state?

- Ans
- 1. Maharashtra
  - 2. Punjab
  - 3. Odisha
  - 4. Assam

Question ID : 264330116277  
Status : Answered  
Chosen Option : 1

Q.13 Guru Bipin Singh won various accolades in which dance form?

- Ans
- 1. Kathak
  - 2. Kathakali
  - 3. Lavani
  - 4. Manipuri

Question ID : 264330115863  
Status : Not Answered  
Chosen Option : --

Q.14 Manufacturing sectors are considered as the \_\_\_\_\_ of general and economic development.

- Ans
- 1. hand
  - 2. foot
  - 3. knee
  - 4. backbone

Question ID : 264330115564  
Status : Answered  
Chosen Option : 4

Q.15 Which of the following equations is correct for one mole of gas?

- Ans
- 1.  $V_1/V_2 = T_1^2/T_2^2$  (at constant pressure)
  - 2.  $V_1/V_2 = \sqrt{T_1}/\sqrt{T_2}$  (at constant pressure)
  - 3.  $V_1/V_2 = T_1/T_2$  (at constant pressure)
  - 4.  $p_1/V_1 = p_1/V_2$  (at constant temperature)

Question ID : 26433066473  
Status : Answered  
Chosen Option : 3

Q.16 Cell is the \_\_\_\_\_ living part of an organism.

- Ans
- 1. longest
  - 2. smallest
  - 3. finest
  - 4. thinnest

Question ID : 264330115242  
Status : Answered  
Chosen Option : 2

Q.17 What does Sub-Section (g) of the list of Fundamental Duties deal with?

- Ans
- 1. Education of Child
  - 2. Protect and improve the natural environment
  - 3. Safeguarding public property
  - 4. Preserve the rich heritage of our composite culture

Question ID : 26433054522  
Status : Not Answered  
Chosen Option : --

Q.18 In India, Green Revolution aimed at:

- Ans
- 1. national food security
  - 2. dependency on other countries
  - 3. national armed force security
  - 4. ozone depletion

Question ID : 264330115427  
Status : Answered  
Chosen Option : 1



Q.19 Quorum in a parliamentary procedure can be understood as the \_\_\_\_\_.

- Ans
- 1. total number of strength of the house
  - 2. minimum number of strength to run the business of the house
  - 3. total members of Lok Sabha
  - 4. total number of ministers present in Rajya Sabha

Question ID : 26433074911  
Status : Answered  
Chosen Option : 1

Q.20 IPR-1956 laid the foundation of the \_\_\_\_\_ Five-Year Plan.

- Ans
- 1. Second
  - 2. Sixth
  - 3. Fourth
  - 4. Tenth

Question ID : 26433054784  
Status : Answered  
Chosen Option : 1

Section : Part-C-Elementary Mathematics

Q.1 Two boats A and B start moving towards each other from two places, 272 km apart. The speed of the boat A and B in still water are 32 km/h and 36 km/h, respectively. If A moves in downstream and B moves in upstream, then in how much time they will meet each other?

- Ans
- 1. 4 hours
  - 2. 3 hours
  - 3. 5 hours
  - 4. 6 hours

Question ID : 26433075520  
Status : Not Answered  
Chosen Option : --

Q.2 What is the value of 10% of 20% of 1750?

- Ans
- 1. 30
  - 2. 35
  - 3. 28
  - 4. 32

Question ID : 26433075646  
Status : Answered  
Chosen Option : 2

Q.3 A shopkeeper allows a discount of 20% on an article. What will be the selling price of the article marked for ₹600?

- Ans
- 1. ₹400
  - 2. ₹480
  - 3. ₹450
  - 4. ₹420

Question ID : 26433087363  
Status : Answered  
Chosen Option : 2

Q.4 A boat can travel at a speed of 10 km/h in still water. If the speed of the stream is 2 km/h, find the time taken by the boat to go 72 km downstream.

- Ans
- 1. 4 hours
  - 2. 7 hours
  - 3. 5 hours
  - 4. 6 hours

Question ID : 26433080133  
Status : Not Answered  
Chosen Option : --

Q.5 A solid metallic cylinder of base radius 3 cm and height 4 cm is melted to form cones, each of height 2 cm and radius 1 cm. The number of cones is:

- Ans
- 1. 58
  - 2. 64
  - 3. 56
  - 4. 54

Question ID : 26433076089  
Status : Answered  
Chosen Option : 4

Q.6 Simplify  $\left[ 3\frac{1}{2} \div \left\{ 1\frac{1}{4} - \left( \frac{1}{2} + \frac{1}{3} \right) \right\} + \frac{7}{5} \right]$ .

- Ans
- 1. 5
  - 2. 7
  - 3.  $9\frac{4}{5}$
  - 4.  $8\frac{5}{6}$

Question ID : 26433074446  
Status : Answered  
Chosen Option : 3

Q.7 Find the compound interest, compounding annually on ₹75,000 for 3 years, if the rate of interest is 5% for the first year, 6% for the second year and 8% for the third year.

- Ans
- 1. ₹15,150
  - 2. ₹15,153
  - 3. ₹15,160
  - 4. ₹15,260

Question ID : 26433080193  
Status : Answered  
Chosen Option : 2

Q.8 The average of 3, 5, 10 and x is 5. The average of 8, 12, 15, x and y is 9. x and y, respectively, are:

- Ans
- 1. 3 and 8
  - 2. 3 and 9
  - 3. 2 and 3
  - 4. 2 and 8

Question ID : 26433082643  
Status : Answered  
Chosen Option : 4

Q.9 A carton of mango juice contains 500 ml. A special offer carton contains an extra 15 percent. How much mango juice is there in the special offer carton?

- Ans
- 1. 575 ml
  - 2. 640 ml
  - 3. 590 ml
  - 4. 545 ml

Question ID : 264330116813  
Status : Answered  
Chosen Option : 1

Q.10 A dishonest seller sells rice at Rs.24/kg, which he has bought at Rs.20/kg, and he gives 800 g instead of 1 kg. His actual profit percentage is:

- Ans
- 1. 43.75%
  - 2. 40%
  - 3. 50%
  - 4. 56.25%

Question ID : 26433072968  
Status : Answered  
Chosen Option : 2

Q.11 The greatest common divisor of 2.16, 2.44 and 3.36 is:

- Ans
- 1. 0.05
  - 2. 0.02
  - 3. 0.03
  - 4. 0.04

Question ID : 26433091510  
Status : Answered  
Chosen Option : 4

Q.12 A and B can do a piece of work in 60 days and 75 days respectively. How many days are required to complete the task if they work together?

- Ans
- 1. 35
  - 2. 35.5
  - 3.  $33\frac{1}{3}$
  - 4. 36

Question ID : 26433079890  
Status : Answered  
Chosen Option : 3

Q.13 Rakesh has to fill water in a cylindrical container of height 10 cm and radius 10 cm with a hemispherical bowl of radius 5 cm. How many times does he have to pour water into the cylindrical container with the hemispherical bowl to fill the tank completely with water?

- Ans
- 1. 16
  - 2. 19
  - 3. 12
  - 4. 15

Question ID : 26433075329  
Status : Not Answered  
Chosen Option : --

Q.14 What will be the amount on a sum of Rs.1,000 for 3 years at 10% compound interest per annum compounding annually?

- Ans
- 1. Rs.1,331
  - 2. Rs.2,311
  - 3. Rs.4,121
  - 4. Rs.3,122

Question ID : 26433064917  
Status : Answered  
Chosen Option : 1

Q.15 A dealer professes to sell his articles at cost price but he uses a false weight of 735 grams for a kilogram. The gain percent of the dealer is: (correct to 2 decimal places)

- Ans
- 1. 38.15%
  - 2. 36.05%
  - 3. 35.25%
  - 4. 40.05%

Question ID : 26433074924  
Status : Answered  
Chosen Option : 2

Q.16 Aman, Raman and Yash together can complete a piece of work in 29 days. Raman and Yash together can complete the same work in 58 days. Aman, Raman and Yash started working together but Aman left the work after 15 days from starting. Find the number of days in which Raman and Yash completed the remaining work.

- Ans
- 1. 21 days
  - 2. 50 days
  - 3. 28 days
  - 4. 54 days

Question ID : 264330116893  
Status : Not Answered  
Chosen Option : --

Q.17 Determine the list price of an item if a 10% discount on the item amounts to ₹100.

- Ans
- 1. ₹800
  - 2. ₹1,000
  - 3. ₹1,500
  - 4. ₹1,200

Question ID : 26433061359  
Status : Answered  
Chosen Option : 2

Q.18 20 kg of rice priced at ₹9 per kg has been mixed with 25 kg of rice priced at ₹10 per kg. What is the average price of 1 kg of the mixed rice? (Rounded off to one decimal place)

- Ans
- 1. ₹7.2
  - 2. ₹6.3
  - 3. ₹8.5
  - 4. ₹9.5

Question ID : 26433079999  
Status : Answered  
Chosen Option : 4

Q.19 Two numbers are in the ratio 2 : 3. If 7 is subtracted from each number, the new numbers are in the ratio 7 : 11. The smaller number is:

- Ans
- 1. 65
  - 2. 54
  - 3. 56
  - 4. 45

Question ID : 26433076375  
Status : Answered  
Chosen Option : 3

Q.20 If 48,  $x^2$  and 27 are in proportion, then the value of x is:

- Ans
- 1. 4
  - 2. 36
  - 3. 6
  - 4. 16

Question ID : 26433075437  
Status : Answered  
Chosen Option : 3

Section : Part-D-English

Q.1 Select the correctly spelt word.

- Ans
- 1. Entrepreneur
  - 2. Entreprineyour
  - 3. Enterpreneur
  - 4. Entripreiniur

Question ID : 26433086496  
Status : Answered  
Chosen Option : 1

Q.2 Select the most appropriate option that can substitute the underlined segment in the given sentence.

The marksheets of many students have been withheld by the university.

- Ans
- 1. kept back
  - 2. gone through
  - 3. handed out
  - 4. given away

Question ID : 26433099872  
Status : Answered  
Chosen Option : 4

**Q.3** Parts of the following sentence have been given as options. One of them may contain an error. Select the part that contains the error from the given options. If you don't find any error, mark 'No error' as your answer.

How foolish I was to have believe that young woman!

- Ans
- 1. to have believe
  - 2. No error
  - 3. How foolish I was
  - 4. that young woman

Question ID : 26433090483  
Status : Answered  
Chosen Option : 1

**Q.4** Select the most appropriate ANTONYM of the underlined word in the given sentence.

She is found to pass derogatory remarks to others.

- Ans
- 1. cunning
  - 2. appreciative
  - 3. critical
  - 4. sarcastic

Question ID : 26433092094  
Status : Answered  
Chosen Option : 2

**Q.5** Select the INCORRECTLY spelt word.

- Ans
- 1. Hapily
  - 2. Quickly
  - 3. Bravely
  - 4. Slowly

Question ID : 26433071818  
Status : Answered  
Chosen Option : 1

**Q.6** Select the most appropriate synonym of the word given in brackets to fill in the blank.

Some women have reached the \_\_\_\_\_(peak) in their profession.

- Ans
- 1. zenith
  - 2. finale
  - 3. sky
  - 4. crossroads

Question ID : 26433070469  
Status : Answered  
Chosen Option : 1

Q.7 Select the most appropriate ANTONYM of the given word.

Smart

- Ans
- 1. Elegant
  - 2. Shabby
  - 3. Speedy
  - 4. Leisurely

Question ID : 26433084686  
Status : Answered  
Chosen Option : 2

Q.8 Select the most appropriate option that can substitute the underlined segment in the given sentence. If there is no need to substitute it, select 'No substitution'.

You cannot walk throughout deserts by bare feet or they'll get burned.

- Ans
- 1. through deserts on
  - 2. through deserts by
  - 3. No substitution
  - 4. though deserts on

Question ID : 26433088910  
Status : Answered  
Chosen Option : 3

Q.9 Select the most appropriate meaning of the underlined idiom in the given sentence.

An ox on their tongue was the only way officers would have allowed him to carry on the unlawful activities he was involved in.

- Ans
- 1. Bribed to remain silent
  - 2. Being frank
  - 3. Telling lies
  - 4. Getting no appreciation

Question ID : 26433072091  
Status : Answered  
Chosen Option : 1

Q.10 Select the most appropriate synonym of the given word.

Hypocrisy

- Ans
- 1. Trickery
  - 2. Honesty
  - 3. Inaccuracy
  - 4. Sincerity

Question ID : 26433074049  
Status : Answered  
Chosen Option : 1



Q.11 Select the most appropriate ANTONYM of the given word.

Flexible

- Ans  1. Obstinate  
 2. Snobbish  
 3. Hysterical  
 4. Staunch

Question ID : 26433091822  
Status : Answered  
Chosen Option : 1

Q.12 Select the most appropriate synonym of the given word.

Obliterate

- Ans  1. Erase  
 2. Assist  
 3. Construct  
 4. Create

Question ID : 26433088203  
Status : Answered  
Chosen Option : 3

Q.13 Select the most appropriate option that can substitute the underlined segment in the given sentence.

His wife has a bad habit for accusing him for others' mistakes too.

- Ans  1. habit of accusing him  
 2. habit at accusing him  
 3. habit on accusing him  
 4. habit in accusing him

Question ID : 26433091966  
Status : Answered  
Chosen Option : 1

Q.14 Select the most appropriate meaning of the given idiom.

Up a creek without a paddle

- Ans  1. In an unfinished mission  
 2. In a partially complete construction work  
 3. In a satisfied and calm atmosphere  
 4. In a troublesome and serious situation

Question ID : 26433073481  
Status : Answered  
Chosen Option : 1

**Q.15** Select the most appropriate synonym of the word given in brackets to fill in the blank.

I suppose it is a \_\_\_\_\_ (fair) solution to the problem at hand.

- Ans
- 1. pale
  - 2. reasonable
  - 3. bright
  - 4. exhibition

Question ID : 26433072110  
Status : Answered  
Chosen Option : 2

**Comprehension:**

In the following passage, some words have been deleted. Read the passage carefully and select the most appropriate option to fill in each blank.

Road rage is a common (1)\_\_\_\_\_ in most parts of the world. Although there are a few countries where the drivers involved just stay stationed (2)\_\_\_\_\_ the police arrive, without getting into any argument, it is not the case in many other countries. There have been instances where people (3)\_\_\_\_\_ killed due to road rage because of the collision or even a minor scratch to one or two of the vehicles involved. Although the insurance companies are doing their best to (4)\_\_\_\_\_ for the losses, the number of instances of road rage continues to (5)\_\_\_\_\_.

**SubQuestion No : 16**

**Q.16** Select the most appropriate option to fill in blank number 1.

- Ans
- 1. dominion
  - 2. structure
  - 3. phenomenon
  - 4. pavilion

Question ID : 26433091794  
Status : Answered  
Chosen Option : 3

**Comprehension:**

In the following passage, some words have been deleted. Read the passage carefully and select the most appropriate option to fill in each blank.

Road rage is a common (1)\_\_\_\_\_ in most parts of the world. Although there are a few countries where the drivers involved just stay stationed (2)\_\_\_\_\_ the police arrive, without getting into any argument, it is not the case in many other countries. There have been instances where people (3)\_\_\_\_\_ killed due to road rage because of the collision or even a minor scratch to one or two of the vehicles involved. Although the insurance companies are doing their best to (4)\_\_\_\_\_ for the losses, the number of instances of road rage continues to (5)\_\_\_\_\_.

**SubQuestion No : 17**

**Q.17** Select the most appropriate option to fill in blank number 2.

- Ans
- 1. besides
  - 2. for
  - 3. along
  - 4. till

Question ID : 26433091795  
Status : Answered  
Chosen Option : 4

**Comprehension:**

In the following passage, some words have been deleted. Read the passage carefully and select the most appropriate option to fill in each blank.

Road rage is a common (1)\_\_\_\_\_ in most parts of the world. Although there are a few countries where the drivers involved just stay stationed (2)\_\_\_\_\_ the police arrive, without getting into any argument, it is not the case in many other countries. There have been instances where people (3)\_\_\_\_\_ killed due to road rage because of the collision or even a minor scratch to one or two of the vehicles involved. Although the insurance companies are doing their best to (4)\_\_\_\_\_ for the losses, the number of instances of road rage continues to (5)\_\_\_\_\_.

**SubQuestion No : 18**

**Q.18 Select the most appropriate option to fill in blank number 3.**

Ans  1. were

2. where

3. would

4. are

Question ID : 26433091796

Status : Answered

Chosen Option : 4

**Comprehension:**

In the following passage, some words have been deleted. Read the passage carefully and select the most appropriate option to fill in each blank.

Road rage is a common (1)\_\_\_\_\_ in most parts of the world. Although there are a few countries where the drivers involved just stay stationed (2)\_\_\_\_\_ the police arrive, without getting into any argument, it is not the case in many other countries. There have been instances where people (3)\_\_\_\_\_ killed due to road rage because of the collision or even a minor scratch to one or two of the vehicles involved. Although the insurance companies are doing their best to (4)\_\_\_\_\_ for the losses, the number of instances of road rage continues to (5)\_\_\_\_\_.

**SubQuestion No : 19**

**Q.19 Select the most appropriate option to fill in blank number 4.**

Ans  1. compensate

2. infiltrate

3. compete

4. hesitate

Question ID : 26433091797

Status : Answered

Chosen Option : 1

**Comprehension:**

In the following passage, some words have been deleted. Read the passage carefully and select the most appropriate option to fill in each blank.

Road rage is a common (1)\_\_\_\_\_ in most parts of the world. Although there are a few countries where the drivers involved just stay stationed (2)\_\_\_\_\_ the police arrive, without getting into any argument, it is not the case in many other countries. There have been instances where people (3)\_\_\_\_\_ killed due to road rage because of the collision or even a minor scratch to one or two of the vehicles involved. Although the insurance companies are doing their best to (4)\_\_\_\_\_ for the losses, the number of instances of road rage continues to (5)\_\_\_\_\_.

**SubQuestion No : 20**

**Q.20** Select the most appropriate option to fill in blank number 5.

- Ans  1. oscillate  
 2. weaken  
 3. ruminate  
 4. escalate

Question ID : 26433091798  
Status : Answered  
Chosen Option : 2

## Section : Part-D-Hindi

**Q.1** वर्तनी की दृष्टि से अशुद्ध वाक्य का चयन कीजिए-

- Ans  1. मैं आपसे असहमत नहीं हूँ।  
 2. यह प्रस्ताव सब को स्वीकार्य है।  
 3. माउंट आबू के मंदिर देखने लायक हैं।  
 4. मेरे पास चार रूपए से अधिक नहीं हैं।

Question ID : 26433062889  
Status : Not Answered  
Chosen Option : --

**Q.2** 'अव्यवस्था' के लिए विलोम शब्द होगा-

- Ans  1. कुव्यवस्था  
 2. सुव्यवस्था  
 3. गड़बड़  
 4. अराजकता

Question ID : 26433085077  
Status : Not Answered  
Chosen Option : --

Q.3 नीचे दिए गए वाक्य में रेखांकित अंश के स्थान पर सबसे उपयुक्त विकल्प कौन-सा होगा?  
मेरे को दिल्ली जाना है।

- Ans
- 1. इसका
  - 2. तेरे को
  - 3. मुझे
  - 4. इसकी

Question ID : 26433066716  
Status : Not Answered  
Chosen Option : --

Q.4 वर्तनी की दृष्टि से अशुद्ध वाक्य का चयन कीजिए-

- Ans
- 1. यदि दवा लगे तो बूखार कम हो जाएगा।
  - 2. मनोहर या तो स्वयं आयेगा या तार भेजेगा।
  - 3. यद्यपि शेर घायल हो गया तथापि वह मारा नहीं गया।
  - 4. मोहन एक पुस्तक चाहता था और वह उसे मिल गई।

Question ID : 26433062897  
Status : Not Answered  
Chosen Option : --

Q.5 निम्नलिखित शब्दों में से कौन सा शब्द द्रव्यवाचक संज्ञा शब्द है?

- Ans
- 1. कोयला
  - 2. साहस
  - 3. सूरज
  - 4. विद्यार्थी

Question ID : 26433085026  
Status : Not Answered  
Chosen Option : --

Q.6 दिए गए मुहावरे में रेखांकित अंश के स्थान पर सबसे उपयुक्त विकल्प कौन-सा होगा?  
'करत करत अभ्यास के आदमी होत सुजान'

- Ans
- 1. मनुष्य
  - 2. राजा
  - 3. जड़मति
  - 4. बुद्धिमति

Question ID : 26433066741  
Status : Not Answered  
Chosen Option : --

Q.7 निम्नलिखित शब्दों में से कौन सा शब्द क्रिया विशेषण शब्द नहीं है?

- Ans  1. कब  
 2. कल  
 3. जब  
 4. क्या

Question ID : 26433085045  
Status : Not Answered  
Chosen Option : --

Q.8 चाँद की अपनी रौशनी नहीं होती अपितु वह \_\_\_\_\_ से प्रकाश पाता है।  
'सूरज' के पर्याय से उपरोक्त वाक्य के रिक्त स्थान की पूर्ति कीजिए।

- Ans  1. ललित  
 2. भूधर  
 3. आदित्य  
 4. हिमकर

Question ID : 26433084987  
Status : Not Answered  
Chosen Option : --

Q.9 निम्नलिखित विकल्पों में से 'जो जाना न जा सके' वाक्यांश के लिए एक सार्थक शब्द क्या होगा?

- Ans  1. अनन्य  
 2. अज्ञेय  
 3. प्रमेय  
 4. सर्वज्ञ

Question ID : 26433062472  
Status : Not Answered  
Chosen Option : --

Q.10 'जो भू के गर्भ का हाल जानता हो' वाक्यांश के लिए इनमें से सही शब्द क्या है?

- Ans  1. परमज्ञानी  
 2. परमेश्वर  
 3. भूगर्भवित्त  
 4. ब्रह्मज्ञानी

Question ID : 26433070149  
Status : Not Answered  
Chosen Option : --

Q.11 निम्नलिखित वाक्य में रेखांकित खंड के स्थान पर प्रयुक्त होने वाले सबसे उपयुक्त विकल्प का चयन कीजिए।

अंशु ने अलमारी से पुस्तक निकाला।

- Ans
- 1. निकाले
  - 2. निकाली
  - 3. निकाल
  - 4. निकली

Question ID : 26433079568

Status : Not Answered

Chosen Option : --

Q.12 निम्न वाक्य में रेखांकित शब्द के विलोम से रिक्त स्थान की पूर्ति कीजिए।  
'जब आदि से सब कुछ अच्छा हो तो \_\_\_\_\_ भी भला ही होता है।'

- Ans
- 1. परिणाम
  - 2. भविष्य
  - 3. आरम्भ
  - 4. अंत

Question ID : 26433085001

Status : Not Answered

Chosen Option : --

Q.13 'हथेली पर सरसों जमाना' मुहावरे का सही अर्थ है -

- Ans
- 1. कम समय में कठिन कार्य करने की कोशिश करना
  - 2. कृषि करना
  - 3. दूसरे की भलाई के लिए खुद को मुश्किल में डालना
  - 4. अच्छी फ़सल होना

Question ID : 26433065929

Status : Not Answered

Chosen Option : --

Q.14 'जिसमें दया की भावना न हो' वाक्यांश के लिए उचित शब्द क्या होगा?

- Ans
- 1. अभय
  - 2. निर्दय
  - 3. निर्जीव
  - 4. निर्भय

Question ID : 26433067066

Status : Not Answered

Chosen Option : --

Q.15 निम्न में से किस वाक्य में 'अधम' के सही पर्यायवाची शब्द का प्रयोग हुआ है?

- Ans
- 1. राकेश सदैव अधर्म का पक्ष लेता है।
  - 2. यह रास्ता नीचे की ओर जाता है।
  - 3. मोहन अत्यंत विद्वान है।
  - 4. वह बहुत नीच व्यक्ति है।

Question ID : 26433067011

Status : Not Answered

Chosen Option : --

**Comprehension:**

निम्न गद्यांश के आधार पर प्रश्न संख्या 1-5 के उत्तर दीजिए।  
निबंध शब्द अंग्रेजी के 'Essay' का हिंदी पर्याय है। जिसका शाब्दिक अर्थ है- किसी विषय पर विचारों को सूत्रबद्ध करना, एकत्र करना, संचित कर संगठित करना आदि। विचार प्रधान रचना ही निबंध का अर्थ वहन करने में सक्षम कही जा सकती है। विषय का तार्किक विश्लेषण, रोचकता, सरसता, पाठकों से आत्मीयता, कलात्मक वैशिष्ट्य निबंध के प्रमुख गुण हैं। निबंध विधा का विकास आधुनिक युग में हुआ है। संस्कृत साहित्य में निबंध बौद्धिक अभिव्यक्ति का माध्यम भर थे। निजी अनुभूति, सहजता, स्वच्छन्दता, प्रभावान्विति जैसे गुणों का इनमें अभाव था। आधुनिक युग का निबंध साहित्य इससे सर्वथा भिन्न है। किसी भी विषय पर व्यक्तिगत विचारों को अभिव्यक्ति प्रदान करते हुए निबंधकार स्वच्छंद चिंतन द्वारा विषय के प्रतिपादन में नवीनता लाता है। किसी भी विषय पर निबंध रचना की जा सकती है। यथा- सुधारात्मक प्रवृत्ति प्रधान, समीक्षात्मक, भाव प्रवण, राष्ट्रीय चेतना प्रधान, मनोविकारों संबंधी। सुगठित कलेवर में श्रृंखलाबद्ध ढंग से विवेचन कर निबंधकार श्रेष्ठ निबंधों की रचना कर सकता है। संस्कृत की इस उक्ति कि- "गद्य कवियों की कसौटी है।" पर आचार्य रामचंद्र शुक्ल का यह कथन- "कि यदि पद्य कवियों की कसौटी तो निबंधकार गद्य की कसौटी है।" निबंध कला का महत्व दर्शाने के लिए पर्याप्त है।

SubQuestion No : 16

Q.16 गद्यांश के अनुसार किस प्रकार की रचना निबंध का अर्थ वहन करने में सक्षम है?

- Ans
- 1. विशेष रचना
  - 2. राष्ट्रीय रचना
  - 3. विचार प्रधान रचना
  - 4. स्वच्छंद

Question ID : 26433080960

Status : Not Answered

Chosen Option : --



**Comprehension:**

निम्न गद्यांश के आधार पर प्रश्न संख्या 1-5 के उत्तर दीजिए।  
निबंध शब्द अंग्रेजी के 'Essay' का हिंदी पर्याय है। जिसका शाब्दिक अर्थ है- किसी विषय पर विचारों को सूत्रबद्ध करना, एकत्र करना, संचित कर संगठित करना आदि। विचार प्रधान रचना ही निबंध का अर्थ वहन करने में सक्षम कही जा सकती है। विषय का तार्किक विश्लेषण, रोचकता, सरसता, पाठकों से आत्मीयता, कलात्मक वैशिष्ट्य निबंध के प्रमुख गुण हैं। निबंध विधा का विकास आधुनिक युग में हुआ है। संस्कृत साहित्य में निबंध बौद्धिक अभिव्यक्ति का माध्यम भर था। निजी अनुभूति, सहजता, स्वच्छन्दता, प्रभावान्विति जैसे गुणों का इनमें अभाव था। आधुनिक युग का निबंध साहित्य इससे सर्वथा भिन्न है। किसी भी विषय पर व्यक्तिगत विचारों को अभिव्यक्ति प्रदान करते हुए निबंधकार स्वच्छंद चिंतन द्वारा विषय के प्रतिपादन में नवीनता लाता है। किसी भी विषय पर निबंध रचना की जा सकती है। यथा- सुधारात्मक प्रवृत्ति प्रधान, समीक्षात्मक, भाव प्रवण, राष्ट्रीय चेतना प्रधान, मनोविकारों संबंधी। सुगठित कलेवर में श्रृंखलाबद्ध ढंग से विवेचन कर निबंधकार श्रेष्ठ निबंधों की रचना कर सकता है। संस्कृत की इस उक्ति कि- "गद्य कवियों की कसौटी है।" पर आचार्य रामचंद्र शुक्ल का यह कथन- "कि यदि पद्य कवियों की कसौटी तो निबंधकार गद्य की कसौटी है।" निबंध कला का महत्व दर्शाने के लिए पर्याप्त है।

**SubQuestion No : 17**

Q.17 निम्नलिखित में से क्या निबंध का प्रमुख गुण नहीं है?

- Ans
- 1. पाठकों से आत्मीयता
  - 2. विषय का तार्किक विश्लेषण
  - 3. कवि की कलात्मकता
  - 4. कलात्मक वैशिष्ट्य

Question ID : 26433080961

Status : Not Answered

Chosen Option : --

**Comprehension:**

निम्न गद्यांश के आधार पर प्रश्न संख्या 1-5 के उत्तर दीजिए।  
निबंध शब्द अंग्रेजी के 'Essay' का हिंदी पर्याय है। जिसका शाब्दिक अर्थ है- किसी विषय पर विचारों को सूत्रबद्ध करना, एकत्र करना, संचित कर संगठित करना आदि। विचार प्रधान रचना ही निबंध का अर्थ वहन करने में सक्षम कही जा सकती है। विषय का तार्किक विश्लेषण, रोचकता, सरसता, पाठकों से आत्मीयता, कलात्मक वैशिष्ट्य निबंध के प्रमुख गुण हैं। निबंध विधा का विकास आधुनिक युग में हुआ है। संस्कृत साहित्य में निबंध बौद्धिक अभिव्यक्ति का माध्यम भर था। निजी अनुभूति, सहजता, स्वच्छन्दता, प्रभावान्विति जैसे गुणों का इनमें अभाव था। आधुनिक युग का निबंध साहित्य इससे सर्वथा भिन्न है। किसी भी विषय पर व्यक्तिगत विचारों को अभिव्यक्ति प्रदान करते हुए निबंधकार स्वच्छंद चिंतन द्वारा विषय के प्रतिपादन में नवीनता लाता है। किसी भी विषय पर निबंध रचना की जा सकती है। यथा- सुधारात्मक प्रवृत्ति प्रधान, समीक्षात्मक, भाव प्रवण, राष्ट्रीय चेतना प्रधान, मनोविकारों संबंधी। सुगठित कलेवर में श्रृंखलाबद्ध ढंग से विवेचन कर निबंधकार श्रेष्ठ निबंधों की रचना कर सकता है। संस्कृत की इस उक्ति कि- "गद्य कवियों की कसौटी है।" पर आचार्य रामचंद्र शुक्ल का यह कथन- "कि यदि पद्य कवियों की कसौटी तो निबंधकार गद्य की कसौटी है।" निबंध कला का महत्व दर्शाने के लिए पर्याप्त है।

**SubQuestion No : 18**

Q.18 गद्यांश के अनुसार विषय में नवीनता किस प्रकार से आती है?

- Ans
- 1. आधुनिकता से
  - 2. निरन्तरता से
  - 3. नैतिकता से
  - 4. स्वच्छंद चिन्तन से

Question ID : 26433080962

Status : Not Answered

Chosen Option : --

**Comprehension:**

निम्न गद्यांश के आधार पर प्रश्न संख्या 1-5 के उत्तर दीजिए।  
निबंध शब्द अंग्रेजी के 'Essay' का हिंदी पर्याय है। जिसका शाब्दिक अर्थ है- किसी विषय पर विचारों को सूत्रबद्ध करना, एकत्र करना, संचित कर संगठित करना आदि। विचार प्रधान रचना ही निबंध का अर्थ वहन करने में सक्षम कही जा सकती है। विषय का तार्किक विश्लेषण, रोचकता, सरसता, पाठकों से आत्मीयता, कलात्मक वैशिष्ट्य निबंध के प्रमुख गुण हैं। निबंध विधा का विकास आधुनिक युग में हुआ है। संस्कृत साहित्य में निबंध बौद्धिक अभिव्यक्ति का माध्यम भर थे। निजी अनुभूति, सहजता, स्वच्छन्दता, प्रभावान्विति जैसे गुणों का इनमें अभाव था। आधुनिक युग का निबंध साहित्य इससे सर्वथा भिन्न है। किसी भी विषय पर व्यक्तिगत विचारों को अभिव्यक्ति प्रदान करते हुए निबंधकार स्वच्छंद चिंतन द्वारा विषय के प्रतिपादन में नवीनता लाता है। किसी भी विषय पर निबंध रचना की जा सकती है। यथा- सुधारात्मक प्रवृत्ति प्रधान, समीक्षात्मक, भाव प्रवण, राष्ट्रीय चेतना प्रधान, मनोविकारों संबंधी। सुगठित कलेवर में श्रृंखलाबद्ध ढंग से विवेचन कर निबंधकार श्रेष्ठ निबंधों की रचना कर सकता है। संस्कृत की इस उक्ति कि- "गद्य कवियों की कसौटी है।" पर आचार्य रामचंद्र शुक्ल का यह कथन- "कि यदि पद्य कवियों की कसौटी तो निबंधकार गद्य की कसौटी है।" निबंध कला का महत्व दर्शाने के लिए पर्याप्त है।

**SubQuestion No : 19**

Q.19 आचार्य रामचंद्र शुक्ल ने गद्यकार की कसौटी किसे माना है?

- Ans
- 1. एकांकी
  - 2. कहानी
  - 3. निबंध
  - 4. नाटक

Question ID : 26433080963

Status : Not Answered

Chosen Option : --

**Comprehension:**

निम्न गद्यांश के आधार पर प्रश्न संख्या 1-5 के उत्तर दीजिए।  
निबंध शब्द अंग्रेजी के 'Essay' का हिंदी पर्याय है। जिसका शाब्दिक अर्थ है- किसी विषय पर विचारों को सूत्रबद्ध करना, एकत्र करना, संचित कर संगठित करना आदि। विचार प्रधान रचना ही निबंध का अर्थ वहन करने में सक्षम कही जा सकती है। विषय का तार्किक विश्लेषण, रोचकता, सरसता, पाठकों से आत्मीयता, कलात्मक वैशिष्ट्य निबंध के प्रमुख गुण हैं। निबंध विधा का विकास आधुनिक युग में हुआ है। संस्कृत साहित्य में निबंध बौद्धिक अभिव्यक्ति का माध्यम भर थे। निजी अनुभूति, सहजता, स्वच्छन्दता, प्रभावान्विति जैसे गुणों का इनमें अभाव था। आधुनिक युग का निबंध साहित्य इससे सर्वथा भिन्न है। किसी भी विषय पर व्यक्तिगत विचारों को अभिव्यक्ति प्रदान करते हुए निबंधकार स्वच्छंद चिंतन द्वारा विषय के प्रतिपादन में नवीनता लाता है। किसी भी विषय पर निबंध रचना की जा सकती है। यथा- सुधारात्मक प्रवृत्ति प्रधान, समीक्षात्मक, भाव प्रवण, राष्ट्रीय चेतना प्रधान, मनोविकारों संबंधी। सुगठित कलेवर में श्रृंखलाबद्ध ढंग से विवेचन कर निबंधकार श्रेष्ठ निबंधों की रचना कर सकता है। संस्कृत की इस उक्ति कि- "गद्य कवियों की कसौटी है।" पर आचार्य रामचंद्र शुक्ल का यह कथन- "कि यदि पद्य कवियों की कसौटी तो निबंधकार गद्य की कसौटी है।" निबंध कला का महत्व दर्शाने के लिए पर्याप्त है।

**SubQuestion No : 20**

Q.20 वैशिष्ट्य शब्द का समानार्थी होगा-

- Ans
- 1. बनावट
  - 2. विशेषता
  - 3. विषय
  - 4. भिन्नता

Question ID : 26433080964

Status : Not Answered

Chosen Option : --

Our Best Seller Book for SSC Banking and other govt. exams

**"BLACKBOOK OF ENGLISH VOCABULARY"**  
(English/Hindi Medium)

Topper's choice For SSC, Railways, Defence and other competitive exams.

# BLACKBOOK of ENGLISH VOCABULARY

March 2023 Edition

- One Word Substitutions
- Idioms / Phrases
- Synonyms + Antonyms + Spellings
- The Hindu Vocabulary
- Homonyms + Phrasal Verbs
- Special Word-Lists
- Root Words
- 100+ Practice Sets



Must Check  
3D Hologram

**15000** words (English /Hindi)

NIKHIL GUPTA

(Coming soon, in a week)

# Constable GD in CAPFs SSF Rifleman GD in Assam Rifles and Sepoy in NCB Examination 2022

Roll Number	examstocks.com
Candidate Name	examstocks.com
Venue Name	ION Digital Zone iDZ SARONA
Exam Date	13/02/2023
Exam Time	5:15 PM - 6:15 PM
Subject	Constable GD Examination 2022

## Section : Part-A-General Intelligence and Reasoning

**Q.1** Six students Lovely, Johnson, Will, Marie, Samantha and Joel are sitting around a circular table facing the centre. Lovely is sitting second to the left of Johnson. Will is sitting second to the right of Johnson. Samantha is sitting third to the left of Will. Joel is sitting third to the right of Johnson. Marie is the immediate neighbour of Will and Johnson. Who is sitting between Lovely and Johnson?

- Ans
- 1. Joel
  - 2. Samantha
  - 3. Will
  - 4. Marie

Question ID : 26433081783

Status : Not Attempted and Marked For Review

Chosen Option : --

**Q.2** Select the letter-cluster from among the given options that can replace the question mark (?) in the following series.  
HLPE, DHXM, ZDFU, ? , RVVK

- Ans
- 1. VQHO
  - 2. FBIR
  - 3. VZNC
  - 4. FPED

Question ID : 26433074752

Status : Answered

Chosen Option : 3

**Q.3** Which of the following numbers will replace the question mark and complete the given number series?  
14, 16, 21, 32, 49, 72, ?

- Ans
- 1. 105
  - 2. 98
  - 3. 103
  - 4. 101

Question ID : 26433069596

Status : Answered

Chosen Option : 4

**Q.4** Select the option that is related to the third word in the same way as the second word is related to the first word.  
(The words must be considered as meaningful English words and must not be related to each other based on the number of letters/number of consonants/vowels in the word)

Wheel : Cart :: Nib : ?

Ans  1. Write

2. Pen

3. Pillow

4. Paper

Question ID : 26433067971

Status : Answered

Chosen Option : 2

**Q.5** In a certain code language,  
'A + B' means 'A is the mother of B',  
'A - B' means 'A is the father of B',  
'A x B' means 'A is the brother of B' and  
'A & B' means 'A is the sister of B'.  
How is Q related to N if N - D x P + Q & C?

Ans  1. Daughter's daughter

2. Daughter

3. Sister

4. Sister's daughter

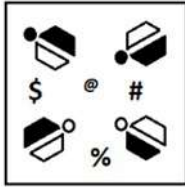
Question ID : 26433070371

Status : Answered

Chosen Option : 3

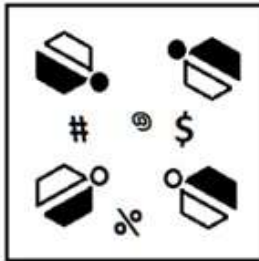
**Q.6** Which of the following figures is the exact mirror image of the given problem figure when the mirror is held at the right side?

Problem figure:

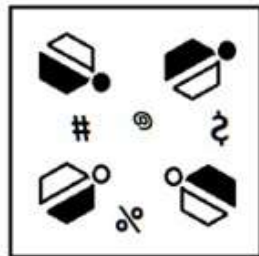


Ans

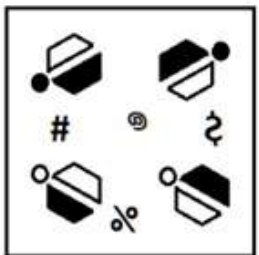
✗ 1.



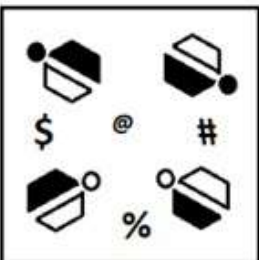
✓ 2.



✗ 3.



✗ 4.

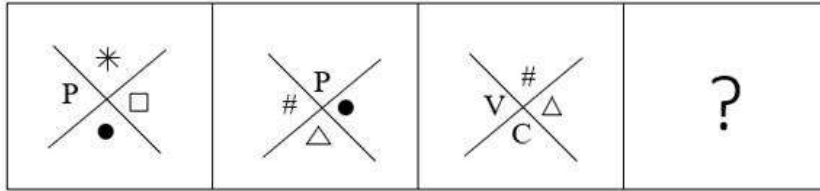


Question ID : 26433087092

Status : Answered

Chosen Option : 4

Q.7 Select the figure from among the given options that can replace the question mark (?) in the following series.

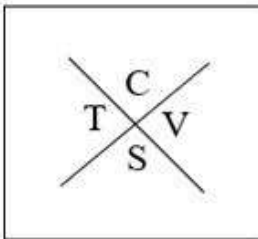


Ans


✗ 1.



✗ 2.



✗ 3.



✓ 4.



Question ID : 26433080759  
 Status : Not Answered  
 Chosen Option : --

Big Book

**Q.8** Nine students A, B, C, D, E, F, G, H and Z are seated in one row not necessarily in the same order. D is to the immediate left of C who is at third place to the right of E. B is at one end of the row. H is seated adjacent to both F and G. F is at the third place to the left of B. A is sitting to the immediate left of F. All these nine students are facing the north direction who is sitting in between D and A?

- Ans
- 1. F
  - 2. C
  - 3. Z
  - 4. H

Question ID : 26433079057

Status : **Not Attempted and Marked For Review**

Chosen Option : --

**Q.9** Select the option that is related to the third word in the same way as the second word is related to the first word.  
(The words must be considered as meaningful English words and must not be related to each other based on the number of letters/number of consonants/vowels in the word)

India : New Delhi :: Australia : ?

- Ans
- 1. Melbourne
  - 2. Canberra
  - 3. Perth
  - 4. Sydney

Question ID : 26433079473

Status : **Answered**

Chosen Option : 4

**Q.10** Which two signs should be interchanged to make the below equation mathematically correct?

$$24 \times 12 - 6 \div 40 + 20 = 28$$

- Ans
- 1. - and +
  - 2. ÷ and -
  - 3. + and ×
  - 4. + and ÷

Question ID : 264330117524

Status : **Answered**

Chosen Option : 2

**Q.11** Which of the following numbers will replace the question mark (?) in the given series?  
3, 9, 21, 45, ?

- Ans
- 1. 156
  - 2. 93
  - 3. 178
  - 4. 134

Question ID : 26433082735

Status : **Answered**

Chosen Option : 2



Q.12 Select the option that is related to the fifth number in the same way as the second number is related to the first number and fourth number is related to the third number.  
2 : 2 :: 4 : 8 :: 8 : ?

- Ans
- 1. 20
  - 2. 16
  - 3. 32
  - 4. 34

Question ID : 26433069431  
Status : Answered  
Chosen Option : 3

Q.13 In a certain code language, 'DRIVER' is written as 'JSETGX' and 'DURING' is written as 'SVEIPK'. How will 'DOLLAR' be written as in that language?

- Ans
- 1. LODRAL
  - 2. MPETCN
  - 3. MPERAL
  - 4. RALLOD

Question ID : 26433090042  
Status : Not Answered  
Chosen Option : --

Q.14 Three statements are given, followed by three conclusions numbered I, II and III. Assuming the statements to be true, even if they seem to be at variance with commonly known facts, decide which of the conclusions logically follow(s) from the statements.

Statements:

No pen is a box.  
Some pens are chalks.  
All chalks are erasers.

Conclusions:

I. Some erasers are pens.  
II. Some chalks are not boxes.  
III. Some boxes are not erasers.

- Ans
- 1. Only conclusion III follows
  - 2. Only conclusions II and III follow
  - 3. Only conclusions I and II follow
  - 4. All conclusions follow

Question ID : 26433090991  
Status : Answered  
Chosen Option : 2

Q.15 Which of the following terms will replace the question mark (?) in the given series?  
EPJY, GNKX, ILLW, ?, MHNU

- Ans
- 1. KKNV
  - 2. LJNU
  - 3. LJMU
  - 4. KJMV

Question ID : 26433069444  
Status : Answered  
Chosen Option : 4

**Q.16** Select the option that represents the correct order of the given words as they would appear in an English dictionary.

1. SPINY
2. SPINE
3. SPINACH
4. SPINNEY
5. SPIRIT
6. SPIKE

- Ans
- 1. 2, 5, 3, 4, 6, 1
  - 2. 6, 2, 5, 1, 4, 3
  - 3. 6, 3, 2, 4, 1, 5
  - 4. 3, 4, 5, 1, 2, 6

Question ID : 26433079379

Status : Answered

Chosen Option : 3

**Q.17** Which two numbers(not digits) and two signs should be interchanged to make the given equation correct?

$$18 \div 3 - 30 + 15 \times 2 = -1$$

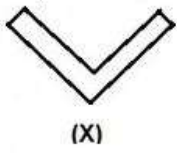
- Ans
- 1. 3 and 30;  $\times$  and  $+$
  - 2. 2 and 18;  $+$  and  $\times$
  - 3. 15 and 3;  $+$  and  $-$
  - 4. 18 and 15;  $+$  and  $-$

Question ID : 26433092746

Status : Answered

Chosen Option : 1

Q.18 Select the option figure in which the given figure (X) is embedded as its part  
(rotation is NOT allowed).



Ans

✓ 1.



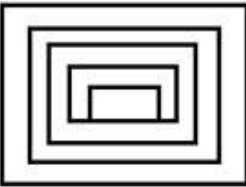
✗ 2.



✗ 3.



✗ 4.

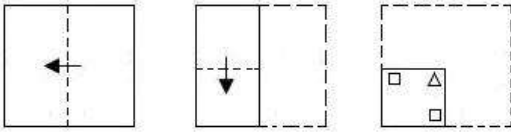


Question ID : 26433069536

Status : Answered

Chosen Option : 1

Q.19 A paper is folded and cut as shown below. How will it appear when unfolded?



Ans

- 1.
- 2.
- 3.
- 4.

Question ID : 26433090089

Status : Answered

Chosen Option : 2

Q.20 In a certain code language, 'SUBTLE' is written as '40CUMF', 'HANGER' is written as '90HFS', how will 'CLOTH' be written as in that language?

- Ans
- 1. 17OTH
  - 2. 15PUI
  - 3. 17PUI
  - 4. 15OTH

Question ID : 26433069649

Status : Answered

Chosen Option : 4

Section : Part-B-General Knowledge and General awareness

Q.1 Glaciers are generally found in \_\_\_\_\_.

- Ans
- 1. Plateaus
  - 2. Plains
  - 3. Mountains
  - 4. Rivers

Question ID : 264330115994

Status : Answered

Chosen Option : 3

**Q.2 National Rural Employment Guarantee Act assures how many days of employment every year to every rural household?**

- Ans
- 1. 250 days
  - 2. 200 days
  - 3. 300 days
  - 4. 100 days

Question ID : 264330116086  
Status : Not Answered  
Chosen Option : --

**Q.3 The lower house of the state legislature is called \_\_\_\_\_.**

- Ans
- 1. Vidhan Parishad
  - 2. Vidhan Sabha
  - 3. Lok Sabha
  - 4. Rajya Sabha

Question ID : 26433086675  
Status : Answered  
Chosen Option : 2

**Q.4 SEWA (Self-Employed Women's Association) Bank, a cooperative bank in Gujarat, was launched in India in \_\_\_\_\_.**

- Ans
- 1. 1974
  - 2. 1894
  - 3. 1994
  - 4. 1874

Question ID : 264330115311  
Status : Answered  
Chosen Option : 3

**Q.5 Fundamental Duties of the Indian Constitution are adopted from which country?**

- Ans
- 1. United States of America
  - 2. Germany
  - 3. Britain
  - 4. USSR (Now Russia)

Question ID : 264330115629  
Status : Answered  
Chosen Option : 4

Q.6 सातवाहन \_\_\_\_\_ भारत में एक शक्तिशाली राजवंश थे।

- Ans
- 1. पूर्वी
  - 2. उत्तरी
  - 3. दक्षिण
  - 4. पश्चिम

Question ID : 264330115464  
Status : Answered  
Chosen Option : 3

Q.7 In which of the following places was the Indian Association founded in colonial India?

- Ans
- 1. Poona
  - 2. Calcutta
  - 3. Surat
  - 4. Lucknow

Question ID : 26433089890  
Status : Answered  
Chosen Option : 2

Q.8 Green Revolution increased the yield of food crops, and thus contributed \_\_\_\_\_ to the Indian Economy.

- Ans
- 1. adverse
  - 2. negative
  - 3. positive
  - 4. neutral

Question ID : 264330115424  
Status : Answered  
Chosen Option : 3

Q.9 Yeast and hydrogen peroxide create \_\_\_\_\_.

- Ans
- 1. oxygen
  - 2. oxygen monoxide
  - 3. carbon dioxide
  - 4. carbon

Question ID : 264330115200  
Status : Answered  
Chosen Option : 2

**Q.10 Which Union Minister of Government of India inaugurated the 'India Chem 2022', in November 2022?**

- Ans  1. Rajnath Singh  
 2. Mansukh Mandaviya  
 3. Kiren Rijju  
 4. Rajeev Chandrashekhar

Question ID : 264330114962  
Status : Not Answered  
Chosen Option : --

**Q.11 Who became the new Chief Minister of Uttarakhand after elections in February 2022?**

- Ans  1. Bhupendra Rajnikant Patel  
 2. Jai Ram Thakur  
 3. Pushkar Singh Dhama  
 4. Pramod Sawant

Question ID : 264330115014  
Status : Answered  
Chosen Option : 3

**Q.12 How many time has India won the Men's Hockey World Cup?**

- Ans  1. 4  
 2. 2  
 3. 1  
 4. 0

Question ID : 264330116305  
Status : Answered  
Chosen Option : 2

**Q.13 Which city smart city bus project has won the India Smart Cities Award (ISAC) 2020 in the Urban Mobility category.**

- Ans  1. Indore  
 2. Aurangabad  
 3. Pune  
 4. Agra

Question ID : 264330115558  
Status : Answered  
Chosen Option : 2

Q.14 Yaoshang festival which is famous in Manipur is celebrated for \_\_\_\_ days.

- Ans  1. four  
 2. three  
 3. two  
 4. five

Question ID : 264330115127  
Status : Not Answered  
Chosen Option : --

Q.15 Who among the following is related with Chhau dance?

- Ans  1. Vidushi K.S. Jayalakshmi  
 2. Mahaboob Subhani  
 3. Suchitra Ella  
 4. Gopal Prasad Dubey

Question ID : 264330115888  
Status : Not Answered  
Chosen Option : --

Q.16 उपभोक्ता संरक्षण अधिनियम 2019 के अनुसार, एक ई-कॉमर्स इकाई भारतीय कंपनी अधिनियम के अनुसार निगमित कंपनी है और यह अनुपालन सुनिश्चित करने के लिए एक \_\_\_\_\_ नियुक्त करेगी।

- Ans  1. अधीनस्थ  
 2. कनिष्ठ कर्मचारी  
 3. सुलह अधिकारी  
 4. नोडल अधिकारी

Question ID : 264330116234  
Status : Answered  
Chosen Option : 4

Q.17 The dimension of the Hockey field is \_\_\_\_\_.

- Ans  1. 95m long and 60m wide  
 2. 96m long and 55m wide  
 3. 90m long and 50m wide  
 4. 91.4m long and 55m wide

Question ID : 264330115948  
Status : Answered  
Chosen Option : 3



Q.18 Which of the following folk dance is performed mainly in Chhattisgarh?

- Ans  1. Raut  
 2. Kalbelia  
 3. Bhangra  
 4. Roudra

Question ID : 26433071421  
Status : Answered  
Chosen Option : 1

Q.19 \_\_\_\_\_ are located on the 17th group on the periodic table.

- Ans  1. Halogens  
 2. Noble Gases  
 3. Chalcogens  
 4. Boron

Question ID : 264330115181  
Status : Answered  
Chosen Option : 2

Q.20 Which crops benefited more from the green revolution?

- Ans  1. Food grains  
 2. Vegetables  
 3. Oilseeds  
 4. Pulses

Question ID : 26433054631  
Status : Answered  
Chosen Option : 2

Section : Part-C-Elementary Mathematics

Q.1 एक वस्तु को ₹900 में बेचने पर अर्जित लाभ उसी वस्तु को ₹450 में बेचने पर हुई हानि का दोगुना है। 25% लाभ कमाने के लिए वस्तु को किस मूल्य पर बेचा जाना चाहिए?

- Ans  1. ₹950  
 2. ₹650  
 3. ₹750  
 4. ₹850

Question ID : 26433075878  
Status : Answered  
Chosen Option : 3

Q.2 A principal becomes ₹19,683 in 3 years at 8 percent per annum compound interest, compounding annually. What is the principal?

- Ans
- 1. ₹16,825
  - 2. ₹14,825
  - 3. ₹15,625
  - 4. ₹13,526

Question ID : 26433079885  
Status : Answered  
Chosen Option : 1

Q.3 At 46 km/h and 36 km/h, two trains of equal length are travelling in the same direction on parallel lines. What is the length of each train if the quicker train passes the slower train in 36 seconds?

- Ans
- 1. 47 metres
  - 2. 50 metres
  - 3. 44 metres
  - 4. 41 metres

Question ID : 26433076331  
Status : Not Answered  
Chosen Option : --

Q.4 The average age of 30 men is 25 years. 5 new men of an average age of 30 years joined them. Find the average age of all the men put together.

- Ans
- 1.  $26\frac{5}{7}$  years
  - 2.  $27\frac{5}{7}$  years
  - 3.  $25\frac{5}{7}$  years
  - 4.  $28\frac{5}{7}$  years

Question ID : 26433076303  
Status : Not Answered  
Chosen Option : --

Q.5 The population of a village during the first year increases by 5% and during the second year it diminishes by 5%. At the end of the second year its population was 9975. What was the population at the beginning of the first year?

- Ans
- 1. 9500
  - 2. 10000
  - 3. 9000
  - 4. 10500

Question ID : 26433075099  
Status : Answered  
Chosen Option : 2

Q.6 If the length, breadth, and height of a cuboidal box are 24 cm, 16 cm, and 12 cm, respectively, then the volume of the box is:

- Ans
- 1.  $4612 \text{ cm}^3$
  - 2.  $4632 \text{ cm}^3$
  - 3.  $4608 \text{ cm}^3$
  - 4.  $4644 \text{ cm}^3$

Question ID : 26433090307

Status : Answered

Chosen Option : 3

Q.7 If goods are purchased for Rs.600 and one fifth is sold at a loss of 20%, at what gain percent should the remainder be sold so as to gain 30% on the whole transaction?

- Ans
- 1. 40%
  - 2. 22%
  - 3. 42.5%
  - 4. 22.5%

Question ID : 26433081021

Status : Answered

Chosen Option : 3

Q.8 What is the total surface area of a hemisphere of diameter 7cm? Take  $\pi = \frac{22}{7}$

- Ans
- 1.  $77 \text{ cm}^2$
  - 2.  $98 \text{ cm}^2$
  - 3.  $87.5 \text{ cm}^2$
  - 4.  $115.5 \text{ cm}^2$

Question ID : 26433076250

Status : Answered

Chosen Option : 1

Q.9 Find the HCF of 0.25, 2.08 and 8.1.

- Ans
- 1. 0.01
  - 2. 0.1
  - 3. 0.05
  - 4. 0.02

Question ID : 26433082589

Status : Answered

Chosen Option : 3

**Q.10** The salary of an employee is first increased by 15% and then it is decreased by 25%.  
What is the percentage increase or decrease in his salary?

- Ans
- 1. 13.75% decrease
  - 2. 12.89% decrease
  - 3. 11.23% increase
  - 4. 14% increase

Question ID : 26433082710  
Status : Not Answered  
Chosen Option : --

**Q.11** A single discount equivalent to 5%, 10%, 15% and 20% is:

- Ans
- 1. 42.76%
  - 2. 41.86%
  - 3. 32.88%
  - 4. 36.92%

Question ID : 26433080222  
Status : Answered  
Chosen Option : 2

**Q.12** Mohan and Ramesh together can do a piece of work in 6 days, and Mohan alone can do it in 10 days. In how many days can Ramesh alone do the same work?

- Ans
- 1. 7.5
  - 2. 11.25
  - 3. 8
  - 4. 15

Question ID : 26433076206  
Status : Answered  
Chosen Option : 3

**Q.13** Find the greatest number by which when numbers 47, 95 and 187 are divided, leave the same remainder in each case.

- Ans
- 1. 6
  - 2. 8
  - 3. 2
  - 4. 4

Question ID : 26433082342  
Status : Answered  
Chosen Option : 3

Q.14 Mohan and Sohan invested ₹6,000 and ₹8,000 respectively in a property simultaneously and after 6 months Sohan withdraws his invested amount. What is the ratio of money received by Mohan and Sohan respectively at the end of one year?

- Ans
- 1. 4:3
  - 2. 2:3
  - 3. 3:4
  - 4. 3:2

Question ID : 26433075672

Status : Not Answered

Chosen Option : --

Q.15 Anit can do a piece of work in 77 days. Ram can do the same work in 11 days. Ram and Anit start working together but Ram left the work 3 days before the completion of the work. Find the approximate number of days in which the work is completed.

- Ans
- 1. 17 days
  - 2. 11 days
  - 3. 14 days
  - 4. 12 days

Question ID : 264330116918

Status : Answered

Chosen Option : 2

Q.16 A milkman bought 45 litres of milk and mixed 15 litres of water in it. If the price per litre of the mixture becomes ₹50, then what is the cost price of the milk per litre? (water is available free of cost)

- Ans
- 1. ₹61  $\frac{2}{3}$
  - 2. ₹34  $\frac{2}{3}$
  - 3. ₹33  $\frac{2}{3}$
  - 4. ₹66  $\frac{2}{3}$

Question ID : 26433076395

Status : Not Answered

Chosen Option : --

Q.17 Vidhi gave Radha ₹8,000 on compound interest for 2 years at 5% per annum, compounding annually. How much loss would Vidhi have suffered had she given it to Radha for 2 years at 5% per annum on simple interest?

- Ans
- 1. ₹12
  - 2. ₹18
  - 3. ₹20
  - 4. ₹15

Question ID : 26433080124  
Status : Answered  
Chosen Option : 2

Q.18 There are 50 students in a class. If the ratio of the number of boys to the girls is 16 : 9, then what is the mean proportional between the number of boys and girls in the school?

- Ans
- 1. 16
  - 2. 22
  - 3. 36
  - 4. 24

Question ID : 26433082388  
Status : Answered  
Chosen Option : 3

Q.19 A car is travelling at a uniform speed of 51 km/h. The distance travelled by the car from 10:40 a.m. to 1:00 p.m. is:

- Ans
- 1. 125 km
  - 2. 119 km
  - 3. 100 km
  - 4. 115 km

Question ID : 26433081591  
Status : Not Answered  
Chosen Option : --

Q.20 Dinesh offers his customers a discount of 15% on a raincoat and he still makes a profit of 25%. What is the actual cost of the raincoat marketed for Rs.800?

- Ans
- 1. Rs.540
  - 2. Rs.546
  - 3. Rs.544
  - 4. Rs.542

Question ID : 26433082976  
Status : Answered  
Chosen Option : 1

Q.1 Parts of the following sentence have been underlined and given as options. Select the option that contains an error.

We all know that sugar and honey tastes very sweet.

- Ans
- 1. sweet
  - 2. know
  - 3. tastes
  - 4. all

Question ID : 26433089370  
Status : Answered  
Chosen Option : 3

Q.2 Select the most appropriate option to fill in the blank as synonym for the underlined word.

The most arrogant employee in his company was sacked by the boss. No one could tolerate his \_\_\_\_\_ nature.

- Ans
- 1. pricey
  - 2. plain
  - 3. dicey
  - 4. haughty

Question ID : 26433094735  
Status : Answered  
Chosen Option : 4

Q.3 Select the INCORRECTLY spelt word.

- Ans
- 1. Venerate
  - 2. Viceregal
  - 3. Retinal
  - 4. Dalmation

Question ID : 26433073761  
Status : Answered  
Chosen Option : 2

Q.4 Select the most appropriate ANTONYM of the given word.

Revive

- Ans
- 1. Revolve
  - 2. Rejuvenate
  - 3. Destroy
  - 4. Incline

Question ID : 26433090798  
Status : Answered  
Chosen Option : 3

**Q.5** Select the most appropriate option that can substitute the underlined segment in the given sentence. If there is no need to substitute it, select 'No substitution required'.

Nithi was not feeling well, yet she decide to go to work.

- Ans
- 1. No substitution required
  - 2. yet she decided to go to work
  - 3. or she decided to go for work
  - 4. yet she have decided to go to work

Question ID : 26433091872  
Status : Answered  
Chosen Option : 2

**Q.6** Substitute the underlined word segment with most appropriate idiom.

They had to cancel their trip at the last minute due to bad weather.

- Ans
- 1. at sixes and sevens
  - 2. at somebody's beck and call
  - 3. at a stone's throw
  - 4. at the eleventh hour

Question ID : 26433084693  
Status : Not Answered  
Chosen Option : --

**Q.7** Select the most appropriate synonym of the given word.

Secure

- Ans
- 1. Secret
  - 2. Independent
  - 3. Safe
  - 4. Comfortable

Question ID : 26433088130  
Status : Answered  
Chosen Option : 3

**Q.8** Select the most appropriate option that can substitute the underlined segment in the given sentence.

The door which connecting the two offices is kept locked.

- Ans
- 1. connects
  - 2. does connecting
  - 3. can connecting
  - 4. has connecting

Question ID : 26433088829  
Status : Answered  
Chosen Option : 3



Q.9 Select the most appropriate option that can substitute the underlined segment in the given sentence.

After a long journey I was looking forward to sleep on a comfortable bed.

- Ans  1. sleeping in a  
 2. sleep into a  
 3. sleeps on a  
 4. sleep over a

Question ID : 264330101306  
Status : Answered  
Chosen Option : 1

Q.10 Select the most appropriate synonym of the given word.

Objective

- Ans  1. Subjective  
 2. Purpose  
 3. Tyrannical  
 4. Heartfelt

Question ID : 26433073983  
Status : Answered  
Chosen Option : 2

Q.11 Select the most appropriate option to fill in the blank.

Soumyashree, while talking on the topic, could not \_\_\_\_\_ the interview board.

- Ans  1. impress  
 2. conceive  
 3. stabilise  
 4. permeate

Question ID : 26433073790  
Status : Not Answered  
Chosen Option : --

Q.12 Select the most appropriate ANTONYM of the given word.

Esteem

- Ans  1. Notice  
 2. Value  
 3. Regret  
 4. Condemn

Question ID : 26433090788  
Status : Not Answered  
Chosen Option : --

Q.13 Select the most appropriate meaning of the given idiom.

Get a second wind

- Ans  1. Have less energy and be extremely tired  
 2. Having less energy after resting  
 3. Have two different choices  
 4. Have renewed energy after having been tired

Question ID : 26433070652  
Status : Answered  
Chosen Option : 3

Q.14 Select the most appropriate ANTONYM of the word given in brackets to fill in the blank.

The keeper had no intention to \_\_\_\_\_ (attend) the goal, but the ball was hit too hard to be stopped.

- Ans  1. believe  
 2. bring  
 3. blow  
 4. miss

Question ID : 26433089748  
Status : Answered  
Chosen Option : 4

Q.15 Select the most appropriate synonym of the given word to fill in the blank in the sentence.

Elaborate

A/an \_\_\_\_\_ water clock depicting zodiac signs is present in the city museum.

- Ans  1. beautiful  
 2. resonant  
 3. divulging  
 4. intricate

Question ID : 26433060557  
Status : Answered  
Chosen Option : 1

**Comprehension:**

In the following passage, some words have been deleted. Read the passage carefully and select the most appropriate option to fill in each blank.

People who hitchhike talk about (1)\_\_\_\_\_ experiences in the course of their journeys. While there are (2)\_\_\_\_\_ bitter experiences, most of the trips are pleasant. What comes out as a common point worth mentioning (3)\_\_\_\_\_ the goodness that most drivers and riders exhibit. The (4)\_\_\_\_\_ rendered by them not just in giving them a ride but in also sponsoring food along the way. Faith in humanity and (5)\_\_\_\_\_ wins in the bargain.

**SubQuestion No : 16**

**Q.16 Select the most appropriate option to fill in blank number 1.**

- Ans  1. worried  
 2. varied  
 3. conversant  
 4. emptied

Question ID : 26433091776

Status : Answered

Chosen Option : 3

**Comprehension:**

In the following passage, some words have been deleted. Read the passage carefully and select the most appropriate option to fill in each blank.

People who hitchhike talk about (1)\_\_\_\_\_ experiences in the course of their journeys. While there are (2)\_\_\_\_\_ bitter experiences, most of the trips are pleasant. What comes out as a common point worth mentioning (3)\_\_\_\_\_ the goodness that most drivers and riders exhibit. The (4)\_\_\_\_\_ rendered by them not just in giving them a ride but in also sponsoring food along the way. Faith in humanity and (5)\_\_\_\_\_ wins in the bargain.

**SubQuestion No : 17**

**Q.17 Select the most appropriate option to fill in blank number 2.**

- Ans  1. such  
 2. much  
 3. lot  
 4. few

Question ID : 26433091777

Status : Answered

Chosen Option : 4

**Comprehension:**

In the following passage, some words have been deleted. Read the passage carefully and select the most appropriate option to fill in each blank.

People who hitchhike talk about (1)\_\_\_\_\_ experiences in the course of their journeys. While there are (2)\_\_\_\_\_ bitter experiences, most of the trips are pleasant. What comes out as a common point worth mentioning (3)\_\_\_\_\_ the goodness that most drivers and riders exhibit. The (4)\_\_\_\_\_ rendered by them not just in giving them a ride but in also sponsoring food along the way. Faith in humanity and (5)\_\_\_\_\_ wins in the bargain.

**SubQuestion No : 18**

**Q.18 Select the most appropriate option to fill in blank number 3.**

Ans  1. are

2. am

3. is

4. on

Question ID : 26433091778

Status : Answered

Chosen Option : 4

**Comprehension:**

In the following passage, some words have been deleted. Read the passage carefully and select the most appropriate option to fill in each blank.

People who hitchhike talk about (1)\_\_\_\_\_ experiences in the course of their journeys. While there are (2)\_\_\_\_\_ bitter experiences, most of the trips are pleasant. What comes out as a common point worth mentioning (3)\_\_\_\_\_ the goodness that most drivers and riders exhibit. The (4)\_\_\_\_\_ rendered by them not just in giving them a ride but in also sponsoring food along the way. Faith in humanity and (5)\_\_\_\_\_ wins in the bargain.

**SubQuestion No : 19**

**Q.19 Select the most appropriate option to fill in blank number 4.**

Ans  1. brevity

2. stringency

3. hospitality

4. conformity

Question ID : 26433091779

Status : Answered

Chosen Option : 2

**Comprehension:**

In the following passage, some words have been deleted. Read the passage carefully and select the most appropriate option to fill in each blank.

People who hitchhike talk about (1)\_\_\_\_\_ experiences in the course of their journeys. While there are (2)\_\_\_\_\_ bitter experiences, most of the trips are pleasant. What comes out as a common point worth mentioning (3)\_\_\_\_\_ the goodness that most drivers and riders exhibit. The (4)\_\_\_\_\_ rendered by them not just in giving them a ride but in also sponsoring food along the way. Faith in humanity and (5)\_\_\_\_\_ wins in the bargain.

**SubQuestion No : 20**

**Q.20** Select the most appropriate option to fill in blank number 5.

- Ans  1. consciousness  
 2. humaneness  
 3. frailty  
 4. animosity

Question ID : 26433091780  
Status : Answered  
Chosen Option : 1

## Section : Part-D-Hindi

**Q.1** 'अपना \_\_\_\_\_ सीधा करना' इस मुहावरे को पूरा करें।

- Ans  1. मतलब  
 2. कमर  
 3. उल्लू  
 4. दिमाग

Question ID : 26433066815  
Status : Not Answered  
Chosen Option : --

**Q.2** निम्न वाक्य में रेखांकित शब्द के लिए विकल्पों में कौन सा शब्द सर्वाधिक उपयुक्त होगा?  
'मैंने तलवार द्वारा शत्रु को मार दिया।'

- Ans  1. वह  
 2. को  
 3. से  
 4. ने

Question ID : 26433066713  
Status : Not Answered  
Chosen Option : --

Q.3 निम्न शब्द के पर्यायवाची शब्द का किस वाक्य में प्रयोग किया गया है?  
पृथ्वी

- Ans  1. वसुधा हरी-भरी है।  
 2. सरिता हरी-भरी है।  
 3. किसलय हरी-भरी है।  
 4. भागीरथी बड़ी है।

Question ID : 26433066935  
Status : Not Answered  
Chosen Option : --

Q.4 'तुम्हारा गांव किधर को है?' इस वाक्य में अशुद्धि पहचाने-

- Ans  1. किधर को  
 2. गांव  
 3. तुम्हारा  
 4. है

Question ID : 26433091302  
Status : Not Answered  
Chosen Option : --

Q.5 निम्न वाक्यांश के लिए सही वर्तनी वाले उपयुक्त एक शब्द का चयन कीजिए।  
जिसे ईश्वर में विश्वास हो

- Ans  1. आस्तिख  
 2. आस्तिक  
 3. आशिक  
 4. आस्तिक

Question ID : 26433070087  
Status : Not Answered  
Chosen Option : --

Q.6 दिए गए मुहावरे में रेखांकित अंश के स्थान पर सबसे उपयुक्त विकल्प कौन-सा होगा?  
'अंधों में काना रानी'

- Ans  1. दोस्त  
 2. राजा  
 3. नौकर  
 4. महाराजा

Question ID : 26433066738  
Status : Not Answered  
Chosen Option : --

Q.7 यह हॉल पंडित समाज के लिए आरक्षित है।  
उपरोक्त वाक्य में रेखांकित पद के स्थान पर निम्न में से कौन सा शब्द आ सकता है?

- Ans
- 1. मूर्ख
  - 2. शिक्षित
  - 3. बुद्ध
  - 4. गरीब

Question ID : 26433079174  
Status : Not Answered  
Chosen Option : --

Q.8 नीचे दिए शब्द के लिए उचित वाक्यांश दिए गए विकल्पों में से चुनिए-  
निरंकुश

- Ans
- 1. जिस पर किसी प्रकार का नियंत्रण न हो
  - 2. जिस पर नियंत्रण किया गया हो
  - 3. जिसे आशा न रह गई हो
  - 4. जिसका कोई आकार न हो

Question ID : 26433062392  
Status : Not Answered  
Chosen Option : --

Q.9 निम्नलिखित में से शुद्ध वाक्य का चयन कीजिए।

- Ans
- 1. उसे शिमला जाना है।
  - 2. उसका शिमला जाना है।
  - 3. उससे शिमला जाना है।
  - 4. उसने शिमला जाना है।

Question ID : 26433066962  
Status : Not Answered  
Chosen Option : --

Q.10 "एक अच्छे निबंध में बुद्धि व हृदय का सामंजस्य होना चाहिए।"  
उक्त वाक्य में प्रयुक्त 'सामंजस्य' के स्थान पर उसके समानार्थी शब्द का प्रयोग निम्न में से किस वाक्य में  
किया गया है?

- Ans
- 1. एक अच्छे निबंध में बुद्धि व हृदय का मिश्रण होना चाहिए।
  - 2. एक अच्छे निबंध में बुद्धि व हृदय का सौष्ठव होना चाहिए।
  - 3. एक अच्छे निबंध में बुद्धि व हृदय का समन्वय होना चाहिए।
  - 4. एक अच्छे निबंध में बुद्धि व हृदय का समुदाय होना चाहिए।

Question ID : 26433067031  
Status : Not Answered  
Chosen Option : --

Q.11 'छत पर कौआ बोल रहा है।'  
उपरोक्त वाक्य में प्रयुक्त 'कौआ' शब्द का पर्याय क्या है?

- Ans
- 1. शिख
  - 2. काक
  - 3. खग
  - 4. पिक

Question ID : 26433080859  
Status : Not Answered  
Chosen Option : --

Q.12 'नकटा \_\_\_\_\_।'।  
उपर्युक्त वाक्य में रिक्त स्थान के लिए उपयुक्त विकल्प निम्न में से क्या होगा?

- Ans
- 1. का अर्थ होता है जिसका कद छोटा हो
  - 2. का अर्थ होता है जिसका नाम न हो
  - 3. का अर्थ होता है जिसकी नाक कटी हो
  - 4. का अर्थ होता है जिसका अंगूठा छोटा हो

Question ID : 26433067044  
Status : Not Answered  
Chosen Option : --

Q.13 निम्नलिखित वाक्य में रेखांकित शब्द के विलोम से वाक्य के रिक्त स्थान की पूर्ति कीजिए।  
अगर पूत कृपूत हो तो मात-पिता का जीवन व्यर्थ हो जाता है और यदि \_\_\_\_\_ हो तो सार्थक।

- Ans
- 1. सपूत
  - 2. विज्ञ
  - 3. उद्योगी
  - 4. दुपूत

Question ID : 26433085005  
Status : Not Answered  
Chosen Option : --

Q.14 रेगिस्तान में \_\_\_\_\_ की सवारी बहुत मजेदार होती है।' इस वाक्य में रिक्त स्थान की पूर्ति शुद्ध  
शब्द द्वारा कीजिए।

- Ans
- 1. उंट
  - 2. ऊट
  - 3. ऊँट
  - 4. ऊख

Question ID : 26433069704  
Status : Not Answered  
Chosen Option : --



Q.15 निम्नलिखित विकल्पों में से कौन सा एक वाक्य क्रिया-विशेषण से सम्बन्ध रखता है?

- Ans
- 1. वे कमाते हैं।
  - 2. पिता का कर्तव्य है कि संतानों का पालन करे।
  - 3. हम पढ़ते हैं।
  - 4. किशन बहुत तेज दौड़ता है।

Question ID : 26433062956

Status : Not Answered

Chosen Option : --

**Comprehension:**

निम्नलिखित गद्यांश में से कुछ शब्द हटा दिए गए हैं। दिए गए विकल्पों की सहायता से रिक्त स्थानों की पूर्ति कीजिए। प्रत्येक संख्या के लिए उपयुक्त विकल्प का चयन कीजिए।

एक पाठशाला का 1. \_\_\_\_\_ था। मैं भी 2. \_\_\_\_\_ बुलाया गया था। वहाँ के प्रधान अध्यापक का एक मात्र पुत्र, जिसकी अवस्था आठ 3. \_\_\_\_\_ की थी, बड़े लाड़ से नुमाइश में मिस्टर हादी के कोल्हू की तरह दिखाया जा रहा था। उसका मुँह पीला था, आँखें सफेद 4. \_\_\_\_\_, दृष्टि भूमि से उठती नहीं थी। 5. \_\_\_\_\_ पूछे जा रहे थे। उनका वह उत्तर दे रहा था।

SubQuestion No : 16

Q.16 रिक्त स्थान 1 की पूर्ति के लिए सर्वाधिक उपयुक्त विकल्प का चयन कीजिए।

- Ans
- 1. वार्षिकोत्सव
  - 2. त्योहार
  - 3. मार्गोत्सव
  - 4. दैनिकोत्सव

Question ID : 26433079704

Status : Not Answered

Chosen Option : --

**Comprehension:**

निम्नलिखित गद्यांश में से कुछ शब्द हटा दिए गए हैं। दिए गए विकल्पों की सहायता से रिक्त स्थानों की पूर्ति कीजिए। प्रत्येक संख्या के लिए उपयुक्त विकल्प का चयन कीजिए।

एक पाठशाला का 1. \_\_\_\_\_ था। मैं भी 2. \_\_\_\_\_ बुलाया गया था। वहाँ के प्रधान अध्यापक का एक मात्र पुत्र, जिसकी अवस्था आठ 3. \_\_\_\_\_ की थी, बड़े लाड़ से नुमाइश में मिस्टर हादी के कोल्हू की तरह दिखाया जा रहा था। उसका मुँह पीला था, आँखें सफेद 4. \_\_\_\_\_, दृष्टि भूमि से उठती नहीं थी। 5. \_\_\_\_\_ पूछे जा रहे थे। उनका वह उत्तर दे रहा था।

SubQuestion No : 17

Q.17 रिक्त स्थान 2 की पूर्ति के लिए सर्वाधिक उपयुक्त विकल्प का चयन कीजिए।

- Ans
- 1. वहाँ
  - 2. सबमें
  - 3. कहाँ
  - 4. किधर

Question ID : 26433079705

Status : Not Answered

Chosen Option : --

**Comprehension:**

निम्नलिखित गद्यांश में से कुछ शब्द हटा दिए गए हैं। दिए गए विकल्पों की सहायता से रिक्त स्थानों की पूर्ति कीजिए। प्रत्येक संख्या के लिए उपयुक्त विकल्प का चयन कीजिए।

एक पाठशाला का 1. \_\_\_\_\_ था। मैं भी 2. \_\_\_\_\_ बुलाया गया था। वहाँ के प्रधान अध्यापक का एक मात्र पुत्र, जिसकी अवस्था आठ 3. \_\_\_\_\_ की थी, बड़े लाड़ से नुमाइश में मिस्टर हादी के कोल्हू की तरह दिखाया जा रहा था। उसका मुँह पीला था, आँखें सफेद 4. \_\_\_\_\_, दृष्टि भूमि से उठती नहीं थी। 5. \_\_\_\_\_ पूछे जा रहे थे। उनका वह उत्तर दे रहा था।

**SubQuestion No : 18**

Q.18 रिक्त स्थान 3 की पूर्ति के लिए सर्वाधिक उपयुक्त विकल्प का चयन कीजिए।

- Ans  1. वर्ष  
 2. घड़ी  
 3. दिन  
 4. पल

Question ID : 26433079706

Status : Not Answered

Chosen Option : --

**Comprehension:**

निम्नलिखित गद्यांश में से कुछ शब्द हटा दिए गए हैं। दिए गए विकल्पों की सहायता से रिक्त स्थानों की पूर्ति कीजिए। प्रत्येक संख्या के लिए उपयुक्त विकल्प का चयन कीजिए।

एक पाठशाला का 1. \_\_\_\_\_ था। मैं भी 2. \_\_\_\_\_ बुलाया गया था। वहाँ के प्रधान अध्यापक का एक मात्र पुत्र, जिसकी अवस्था आठ 3. \_\_\_\_\_ की थी, बड़े लाड़ से नुमाइश में मिस्टर हादी के कोल्हू की तरह दिखाया जा रहा था। उसका मुँह पीला था, आँखें सफेद 4. \_\_\_\_\_, दृष्टि भूमि से उठती नहीं थी। 5. \_\_\_\_\_ पूछे जा रहे थे। उनका वह उत्तर दे रहा था।

**SubQuestion No : 19**

Q.19 रिक्त स्थान 4 की पूर्ति के लिए सर्वाधिक उपयुक्त विकल्प का चयन कीजिए।

- Ans  1. होगी  
 2. थीं  
 3. होती  
 4. था

Question ID : 26433079707

Status : Not Answered

Chosen Option : --

**Comprehension:**

निम्नलिखित गद्यांश में से कुछ शब्द हटा दिए गए हैं। दिए गए विकल्पों की सहायता से रिक्त स्थानों की पूर्ति कीजिए। प्रत्येक संख्या के लिए उपयुक्त विकल्प का चयन कीजिए।

एक पाठशाला का 1. \_\_\_\_\_ था। मैं भी 2. \_\_\_\_\_ बुलाया गया था। वहाँ के प्रधान अध्यापक का एक मात्र पुत्र, जिसकी अवस्था आठ 3. \_\_\_\_\_ की थी, बड़े लाड़ से नुमाइश में मिस्टर हादी के कोल्हू की तरह दिखाया जा रहा था। उसका मुँह पीला था, आँखें सफेद 4. \_\_\_\_\_, दृष्टि भूमि से उठती नहीं थी। 5. \_\_\_\_\_ पूछे जा रहे थे। उनका वह उत्तर दे रहा था।

**SubQuestion No : 20**

**Q.20** रिक्त स्थान 5 की पूर्ति के लिए सर्वाधिक उपयुक्त विकल्प का चयन कीजिए।

- Ans**
- 1. रिश्ते
  - 2. बातें
  - 3. कहानी
  - 4. प्रश्न

Question ID : 26433079708

Status : Not Answered

Chosen Option : --